

CHEMOLOGY EDUCATION SERVICES

Name: _____

Victorian Certificate of Education 2008 CHEMISTRY Unit 4 TRIAL EXAM

Time allowed: 1 hour 30 minutes

QUESTION AND ANSWER BOOKLET

Structure of booklet

<u>Section</u>	<u>Number of questions</u>	<u>Number of questions to be answered</u>
A	20 multiple choice questions	20 multiple choice questions
B	8	8

Directions to students

Materials

Question and answer booklet of 20 pages.
Answer sheet for multiple choice questions.
An approved calculator may be used.

The Task

Pleasure ensure that you write your name on the multiple choice answer sheet and this answer booklet.
Answer **all** items from Section A, which should be answered on the sheet provided.
Answer **all** questions from Section B, which should be answered in this booklet in the spaces provided.
There is a total of 73 marks available.
All answers should be written in English.

© CHEMOLOGY EDUCATION SERVICES
P O BOX 477 MENTONE 3194
Telephone/Fax 9587 2839 or 0412 405 403

SECTION A

Specific instructions for Section A

Question 1 consists of 20 multiple choice questions. Section A is worth approximately 27% of the marks available. You should spend about 30 minutes on this section.

Choose the response that is **correct** or **best answers the question**, and mark your choice on the multiple choice answer sheet provided.

No credit will be given for an item if two or more letters are marked for that question. Marks will not be deducted for incorrect answers and you should attempt every question.

Question 1

Consider the following reaction:



Which of the following properties could best be used to measure the reaction rate?

- A. the volume of CO_2
- B. the volume of H_2O
- C. the mass of CH_3COOH
- D. the surface area of NaHCO_3

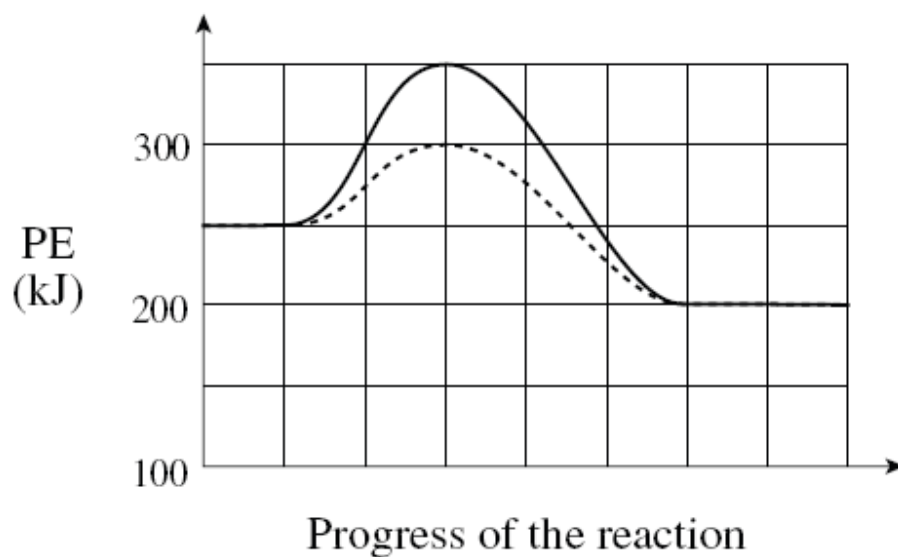
Question 2

Which of the following are necessary for successful collisions between reactant molecules?

I.	high concentration
II.	sufficient energy
III.	correct geometry
IV.	presence of a catalyst

- A. I and II only
- B. II and III only
- C. III and IV only
- D. I, II and III only

Consider the following PE diagram:



Question 3

Which of the following is true for the **reverse reaction**?

		ΔH	E_a
A.	catalyzed	-50 kJ	100 kJ
B.	catalyzed	+50 kJ	150 kJ
C.	uncatalyzed	-50 kJ	100 kJ
D.	uncatalyzed	+50 kJ	150 kJ

Question 4

Consider the following equilibrium system:



An equilibrium mixture of NO(g), O₂(g) and NO₂(g) is transferred from a 1.0 L container to a 2.0 L container. Which reaction is favoured and what happens to the [NO₂]?

	Reaction Favoured	[NO ₂]
A.	reverse	increases
B.	reverse	decreases
C.	forward	increases
D.	forward	decreases

Question 5

Methanol CH₃OH is produced according to the following equilibrium equation:



Which conditions would favour a high yield of methanol?

	Temperature	Pressure
A.	low	low
B.	low	high
C.	high	low
D.	high	high

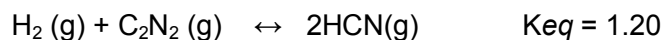
Question 6

Which of the following is a renewable resource?

- A. Ethanol
- B. Uranium
- C. Petroleum
- D. Aluminium

Question 7

Consider the following equilibrium equation:



Initially, 0.86mol H_2 , 2.8mol C_2N_2 and 1.6mol HCN are placed in a 2.0L flask. Which of the following is true?

- A. Trial $K_{\text{eq}} > K_{\text{eq}}$ so the reaction proceeds to the left.
- B. Trial $K_{\text{eq}} < K_{\text{eq}}$ so the reaction proceeds to the left.
- C. Trial $K_{\text{eq}} < K_{\text{eq}}$ so the reaction proceeds to the right.
- D. Trial $K_{\text{eq}} > K_{\text{eq}}$ so the reaction proceeds to the right.

Question 8

What is the pH of a 2.5M KOH solution?

- A. -0.40
- B. 0.40
- C. 13.60
- D. 14.40

Question 9

One of the species in the chemical indicator HIn^- exhibits a yellow colour. If acid is added, the indicator turns red. Which of the following is correct?

	Red	Yellow
A.	In^{2-}	H_2In
B.	In^{2-}	HIn^-
C.	HIn^-	H_2In
D.	H_2In	HIn^-

Question 10

How does the oxidation number change for O if Na_2O_2 is converted to Na and O_2 ?

- A. decreases by 1
- B. no change
- C. increases by 1
- D. increases by 2

Use the following half-reactions to answer questions 11 and 12.

1	$2\text{H}_2\text{SO}_3 + 2\text{H}^+ + 4\text{e}^- \rightarrow \text{S}_2\text{O}_3^{2-} + 3\text{H}_2\text{O}$
2	$\text{SnCl}_6^{2-} + 2\text{e}^- \rightarrow \text{Sn}^{2+} + 6\text{Cl}^-$
3	$\frac{1}{2}\text{Hg}_2^{2+} + \text{e}^- \rightarrow \text{Hg}(\ell)$
4	$\text{Sb}_2\text{O}_5 + 6\text{H}^+ + 4\text{e}^- \rightarrow 2\text{Sb}(\text{OH})_2^+ + \text{H}_2\text{O}$

Question 11

A redox reaction occurs when Sb_2O_5 is mixed with $\text{S}_2\text{O}_3^{2-}$, but no reaction occurs when Sb_2O_5 is mixed with Hg. A solution of SnCl_6^{2-} has no effect on $\text{S}_2\text{O}_3^{2-}$. Which of the following describes the order of the half-reaction reduction potentials from highest to lowest?

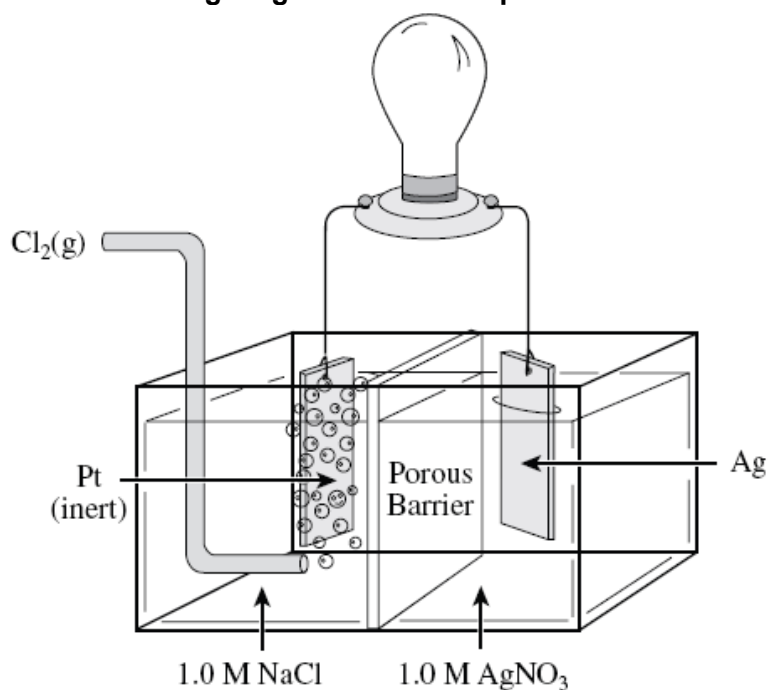
- A. $2 > 1 > 4 > 3$
- B. $2 > 4 > 1 > 3$
- C. $3 > 1 > 4 > 2$
- D. $3 > 4 > 1 > 2$

Question 12

The initial voltage of a standard electrochemical cell based on the half-reactions 3 and 4 above, is 0.22V. If Hg_2^{2+} is reduced and its E^0 is +0.80 volts, what is the reduction potential for half-reaction 4?

- A. -0.58 V
- B. +0.58V
- C. +0.63V
- D. +1.02V

Use the following diagram to answer questions 13 and 14.



Question 13

Which of the following gives the anode material and its correct half-reaction?

	Anode	Anode Half-reaction
A.	Pt	$2\text{Cl}^- \rightarrow \text{Cl}_2 + 2\text{e}^-$
B.	Cl_2	$\text{Cl}_2 + 2\text{e}^- \rightarrow 2\text{Cl}^-$
C.	Ag	$\text{Ag} \rightarrow \text{Ag}^+ + \text{e}^-$
D.	Ag	$\text{Ag}^+ + \text{e}^- \rightarrow \text{Ag}$

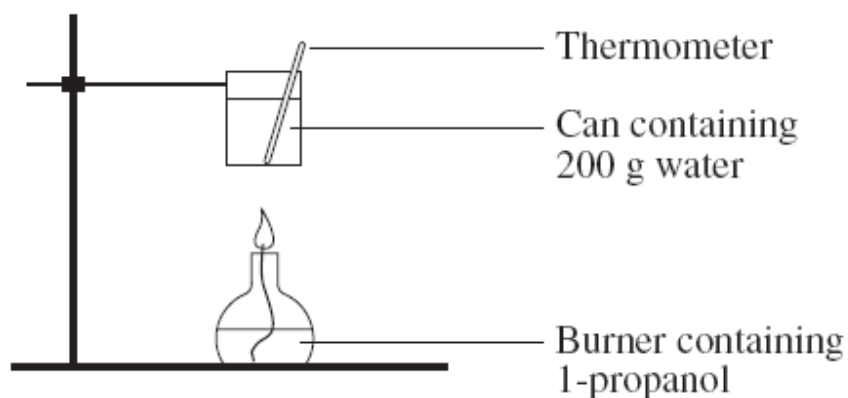
Question 14

After the cell has operated for a time, ion migration through the porous barrier has taken place. What observation would be expected from the resulting mixtures?

- A. A solid would form on the silver electrode.
- B. A precipitate would form in both half-cells.
- C. A precipitate would form in the silver half-cell only.
- D. A precipitate would form in the chlorine half-cell only.

Question 15

A student used the apparatus below to determine the molar heat of combustion of propanol, $\text{C}_3\text{H}_7\text{OH}$.



The following results were obtained:

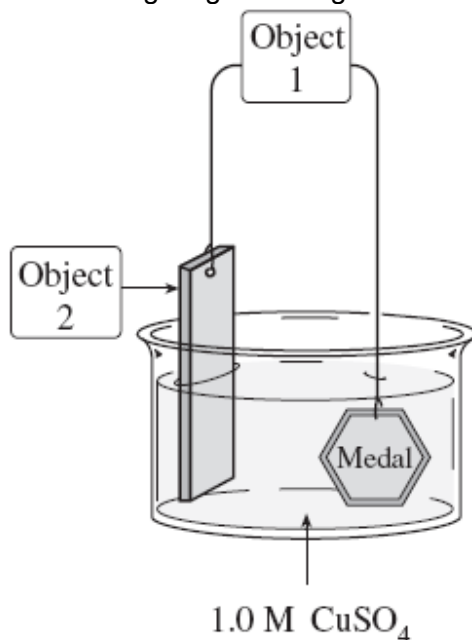
Mass of 1-propanol burnt	= 0.60 g
Mass of water heated	= 200 g
Initial temperature of water	= 21.0°C

The molar heat of combustion of 1-propanol is 2021 kJ mol^{-1} and it takes 4.18 J to raise 1 g of water by 1°C . Assuming no heat loss, what would be the final temperature of the water?

- A 24.2°C
- B 29.1°C
- C 45.2°C
- D 48.4°C

Question 16

A student brought an old silver medal to the chemistry lab to plate it with copper. He set up a cell like the one in the following diagram using 200ml of 1.0M CuSO_4



A current of 10.72A is run passed through the cell for 15 minutes. The final concentration of the CuSO_4 solution is

- A. 0.25M
- B. 0.50M
- C. 0.75M
- D. 1.0M

Question 17

Which pair of factors both affect the amount (in mol) of chlorine produced in the electrolysis of aqueous sodium chloride?

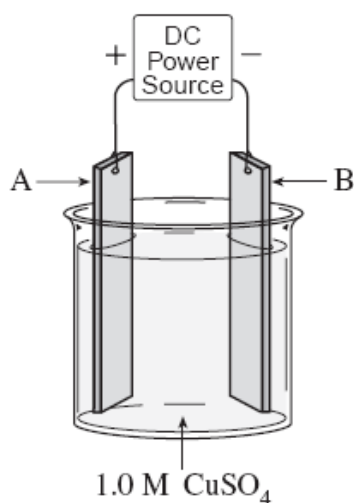
- A. current and temperature
- B. temperature and chloride ion concentration
- C. chloride ion concentration and length of time of electrolysis
- D. pressure and length of time of electrolysis

Question 18

Which of the following occurs during the electrolysis of molten KCl?

- A. Oxygen forms at the anode.
- B. Potassium forms at the anode.
- C. Chlorine forms at the cathode.
- D. Potassium forms at the cathode.

Use the following diagram to answer questions 19 and 20.



Question 19

The above cell is constructed in order to copper plate an object. For best results, which of the following should be used for electrodes A and B?

	Electrode A	Electrode B
A.	object	pure copper
B.	pure copper	object
C.	object	any conductor
D.	any conductor	object

Question 20

A student tries to use the above apparatus to copper plate a zinc object. What will happen if the student places the zinc object at A and the copper electrode at B?

	Electrode A	Electrode B
A.	Cu _(s) forms	Cu dissolves
B.	Zn dissolves	Zn _(s) forms
C.	Zn dissolves	Cu _(s) forms
D.	Bubbles form	Bubbles form

END OF SECTION A

SECTION B**Specific Instructions for Section B**

Section B consists of 8 short answer questions (question 1 to 8). You must answer all of these questions. The section is worth 53 marks or approximately 73% of the total. You should spend approximately 60 minutes on this section. The marks allocated and suggested times are at the end of each question.

Questions should be answered in the spaces provided in this booklet.

You should

* give simplified answers with the appropriate number of significant figures. Unsimplified answers will not receive full marks.

* Show all working in your answers to numerical problems. No marks can be given unless accompanied by working.

* make sure all chemical equations are balanced and that formulas for individual substances include an indication of state. Eg $\text{H}_2(\text{g})$, $\text{NaCl}(\text{s})$.

Question 1 (4 marks)

The dissolving of calcium chloride in water is represented by:




(a) (i) Explain what ΔH represents. (1 mark)

(ii) State whether this is an exothermic or endothermic reaction. (1 mark)

(b) If 50.0 g of calcium chloride were dissolved in excess water what would be the energy change resulting from the reaction? (2 marks)

Question 2 (8 marks)

A farm fence is made of wooden posts with three strands of galvanised wire between the posts. The corner post has a steel sign nailed to it.



(a) After a particularly wet winter the sign fell off because the iron nails had rusted. Explain why the iron nails had more rust on the part that had been inside the post. Include relevant equations and a diagram.

(3 marks)

(b) The farmer repaired the fence and replaced the steel sign using copper nails thinking that they would not corrode in the post. However, the sign fell off again a few months later. Explain why.

(3 marks)

(c) The next summer the fence was burned in a bush fire. Explain why the wire strands rusted very quickly after the fire.

(2 marks)

Question 3 (8 marks)

A typical Hall-Heroult cell used for the electrolytic extraction of aluminium from alumina, Al_2O_3 , operates at 5.00 volts with a current of 150 000 amperes.

- (a) Write the half equation for the reduction of the aluminium ion in the alumina. (1 mark)

- (b) Determine the mass of aluminium produced by such a cell over a 24-hour period. (3 marks)

Calcium is produced by the electrolysis of molten calcium chloride, CaCl_2 , using inert electrodes.

- (c) Write an equation showing the products at: (2 marks)

- (i) the anode:

- (ii) the cathode:

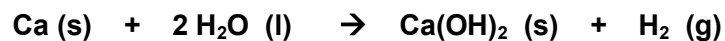
- (d) If a solution of calcium chloride were electrolysed with inert electrodes, indicate (using an equation) the products expected at each electrode. (2 marks)

- (i) the anode:

- (ii) the cathode:

Question 4 (4 marks)

The reaction between calcium and water is represented by:



A student conducts an experiment and has three beakers containing the following:

- **Beaker A:** 2.00 g lump of calcium, 2.00 L of water at 15°C temperature;
- **Beaker B:** 2.00 g lump of calcium, 2.00 L of water at 25°C temperature;
- **Beaker C:** 2.00 g of small calcium pieces, 2.00 L of water at 25°C temperature.

(a) Which beaker will have the fastest reaction rate? (1 mark)

(b) Give reasons in terms of Collision Theory for your answer in (a). (3 marks)

Question 5 (6 marks)

You have studied the production of one of the following industrial chemicals in this unit:

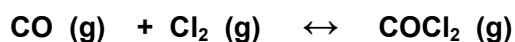
ammonia, ethene, sulfuric acid or nitric acid.

a) Equilibrium principals are involved in the prodcution of each of these chemicals. Chose one from the list above and write an equilibrium equation that occurs during its production. Include whether the reaction is exothermic or endothermic. (2 marks)

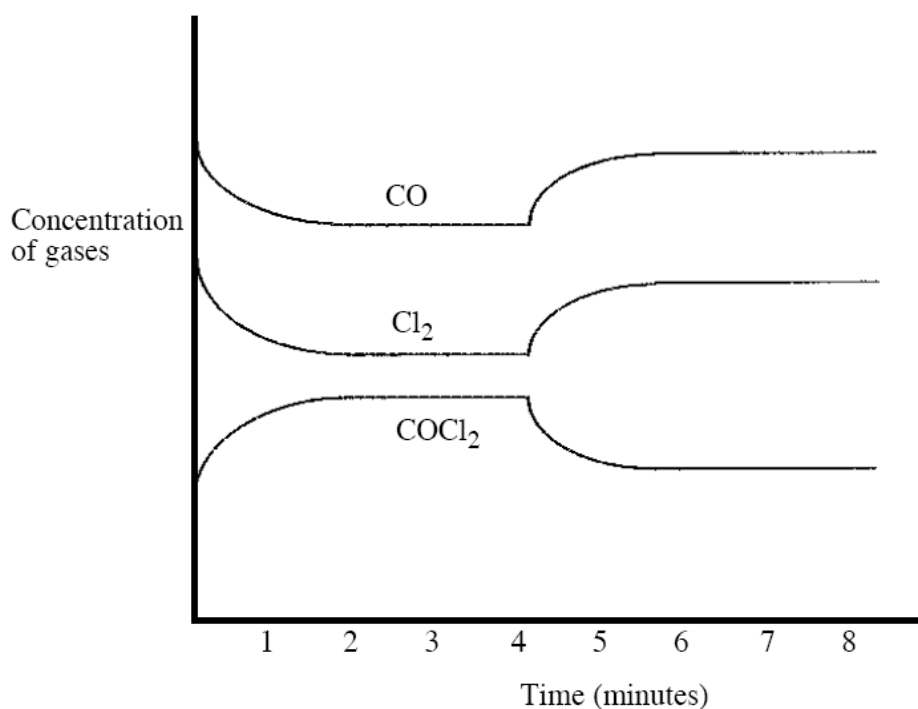
b) Explain with reference to the chosen equation how factors affecting rate and equilibrium are applied to achieve optimum conditions for the reaction to proceed. (4 marks)

Question 6 (8 marks)

Phosgene gas, COCl_2 , is prepared according to the following reversible reaction:



A mixture containing these three gases is introduced into a closed system in the presence of a charcoal catalyst. The following graph shows how the concentration of these gases varies with time.



(a) Describe the system three minutes after mixing.

(1 mark)

(b) Four minutes after mixing, the temperature was increased by 25°C . From the system's response shown on the graph above, deduce whether the reaction as written is endothermic or exothermic. Explain.

(2 marks)

Question 6 continued

(c) Write an expression for the equilibrium constant of this reaction. (1 mark)

(d) 0.100 mole of $\text{COCl}_2(g)$ is put into a 2.00 L closed vessel and allowed to come to equilibrium at 25°C . When equilibrium was reached the $\text{COCl}_2(g)$ concentration is measured as 0.0447M. Calculate the equilibrium constant at a temperature of 25°C . (4 marks)

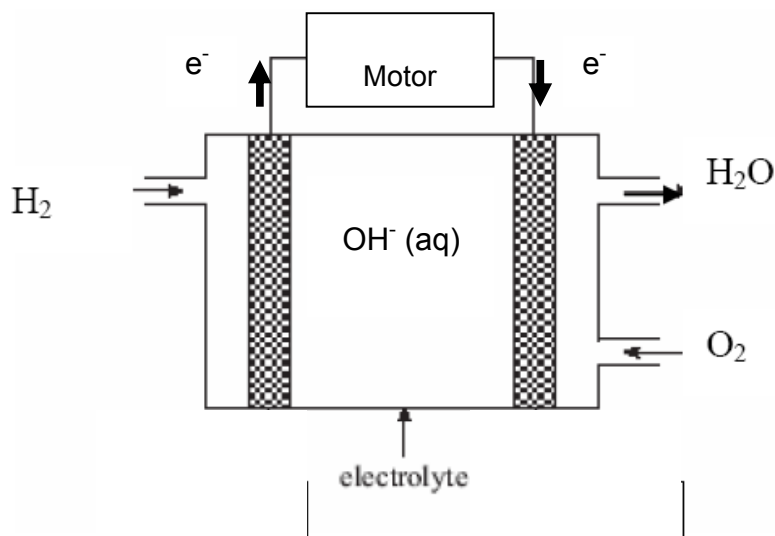
Question 7 (6 marks)

(a) Determine the pH of a 0.0155M aqueous solution of the strong base barium hydroxide, $\text{Ba}(\text{OH})_2$.
(2 marks)

(b) The K_a for ethanoic acid, CH_3COOH , is 1.80×10^{-5} . Calculate the pH of a 0.150M aqueous solution of ethanoic acid.
(4 marks)

Question 8 (9 marks)

Car makers are quite well advanced in the development of fuel cells for cars using hydrogen gas as the main fuel. A simplified diagram is shown below:



The fuel cell consists of two sections: hydrogen gas is pumped through one half and oxygen gas the other. The two halves are joined and an alkaline electrolyte such as KOH passes through the middle. The electrodes consist of a porous nickel alloy mesh.

a) Write balanced ionic half equations for the reactions occurring at the anode and cathode. (2 marks)

Anode _____

Cathode _____

b) i) State **two** roles of the nickel electrodes. (2 marks)

Question 8 continued

ii) Given that the cost of building an engine to run on hydrogen is significantly greater than petrol engines, give **two** advantages of using these cells over petrol engines. (2 marks)

c) A particular fuel cell generated 7.82 A for 2.00 hours. Calculate the volume of hydrogen gas required at a pressure of 3000 kPa and a temperature of 200°C during this time. (3 marks)

END OF EXAM

Physical constants

$$F = 96\,500 \text{ C mol}^{-1}$$

$$R = 8.31 \text{ J K}^{-1} \text{ mol}^{-1}$$

$$1 \text{ atm} = 101\,325 \text{ Pa} = 760 \text{ mmHg}$$

$$0^\circ\text{C} = 273 \text{ K}$$

$$\text{Molar volume at STP} = 22.4 \text{ L mol}^{-1}$$

$$\text{Avogadro constant} = 6.02 \times 10^{23} \text{ mol}^{-1}$$

The electrochemical series

	E° in volt
$\text{F}_2(\text{g}) + 2\text{e}^- \rightarrow 2\text{F}^-(\text{aq})$	+2.87
$\text{H}_2\text{O}_2(\text{aq}) + 2\text{H}^+(\text{aq}) + 2\text{e}^- \rightarrow 2\text{H}_2\text{O}(\text{l})$	+1.77
$\text{Au}^+(\text{aq}) + \text{e}^- \rightarrow \text{Au}(\text{s})$	+1.68
$\text{Cl}_2(\text{g}) + 2\text{e}^- \rightarrow 2\text{Cl}^-(\text{aq})$	+1.36
$\text{O}_2(\text{g}) + 4\text{H}^+(\text{aq}) + 4\text{e}^- \rightarrow 2\text{H}_2\text{O}(\text{l})$	+1.23
$\text{Br}_2(\text{l}) + 2\text{e}^- \rightarrow 2\text{Br}^-(\text{aq})$	+1.09
$\text{Ag}^+(\text{aq}) + \text{e}^- \rightarrow \text{Ag}(\text{s})$	+0.80
$\text{Fe}^{3+}(\text{aq}) + \text{e}^- \rightarrow \text{Fe}^{2+}(\text{aq})$	+0.77
$\text{I}_2(\text{s}) + 2\text{e}^- \rightarrow 2\text{I}^-(\text{aq})$	+0.54
$\text{O}_2(\text{g}) + 2\text{H}_2\text{O}(\text{l}) + 4\text{e}^- \rightarrow 4\text{OH}^-(\text{aq})$	+0.40
$\text{Cu}^{2+}(\text{aq}) + 2\text{e}^- \rightarrow \text{Cu}(\text{s})$	+0.34
$\text{S}(\text{s}) + 2\text{H}^+(\text{aq}) + 2\text{e}^- \rightarrow \text{H}_2\text{S}(\text{g})$	+0.14
$2\text{H}^+(\text{aq}) + 2\text{e}^- \rightarrow \text{H}_2(\text{g})$	0.00
$\text{Pb}^{2+}(\text{aq}) + 2\text{e}^- \rightarrow \text{Pb}(\text{s})$	-0.13
$\text{Sn}^{2+}(\text{aq}) + 2\text{e}^- \rightarrow \text{Sn}(\text{s})$	-0.14
$\text{Ni}^{2+}(\text{aq}) + 2\text{e}^- \rightarrow \text{Ni}(\text{s})$	-0.23
$\text{Co}^{2+}(\text{aq}) + 2\text{e}^- \rightarrow \text{Co}(\text{s})$	-0.28
$\text{Fe}^{2+}(\text{aq}) + 2\text{e}^- \rightarrow \text{Fe}(\text{s})$	-0.44
$\text{Zn}^{2+}(\text{aq}) + 2\text{e}^- \rightarrow \text{Zn}(\text{s})$	-0.76
$2\text{H}_2\text{O}(\text{l}) + 2\text{e}^- \rightarrow \text{H}_2(\text{g}) + 2\text{OH}^-(\text{aq})$	-0.83
$\text{Mn}^{2+}(\text{aq}) + 2\text{e}^- \rightarrow \text{Mn}(\text{s})$	-1.03
$\text{Al}^{3+}(\text{aq}) + 3\text{e}^- \rightarrow \text{Al}(\text{s})$	-1.67
$\text{Mg}^{2+}(\text{aq}) + 2\text{e}^- \rightarrow \text{Mg}(\text{s})$	-2.34
$\text{Na}^+(\text{aq}) + \text{e}^- \rightarrow \text{Na}(\text{s})$	-2.71
$\text{Ca}^{2+}(\text{aq}) + 2\text{e}^- \rightarrow \text{Ca}(\text{s})$	-2.87
$\text{K}^+(\text{aq}) + \text{e}^- \rightarrow \text{K}(\text{s})$	-2.93
$\text{Li}^+(\text{aq}) + \text{e}^- \rightarrow \text{Li}(\text{s})$	-3.02

Ideal gas equation

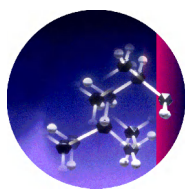
$$pV = nRT$$

Periodic table of the elements

1 H 1.0																	2 He 4.0
3 Li 6.9	4 Be 9.0															9 F 19.0	10 Ne 20.1
11 Na 23.0	12 Mg 24.3															17 Cl 35.5	18 Ar 39.9
19 K 39.1	20 Ca 40.1	21 Sc 44.9	22 Ti 47.9	23 V 50.9	24 Cr 52.0	25 Mn 54.9	26 Fe 55.9	27 Co 58.9	28 Ni 58.7	29 Cu 63.6	30 Zn 65.4	31 Ga 69.7	32 Ge 72.6	33 As 74.9	34 Se 79.0	35 Br 79.9	36 Kr 83.8
37 Rb 85.5	38 Sr 87.6	39 Y 88.9	40 Zr 91.2	41 Nb 92.9	42 Mo 95.9	43 Tc 98.1	44 Ru 101.1	45 Rh 102.9	46 Pd 106.4	47 Ag 107.9	48 Cd 112.4	49 In 114.8	50 Sn 118.7	51 Sb 121.8	52 Te 127.6	53 I 126.9	54 Xe 131.3
55 Cs 132.9	56 Ba 137.3	57 La 138.9	72 Hf 178.5	73 Ta 180.9	74 W 183.8	75 Re 186.2	76 Os 190.2	77 Ir 192.2	78 Pt 197.0	79 Au 197.0	80 Hg 200.6	81 Tl 204.4	82 Pb 207.2	83 Bi 209.0	84 Po (209)	85 At (210)	86 Rn (222)
87 Fr (223)	88 Ra (226)	89 Ac (227)															

<i>Lanthanides</i>																	
58 Ce 140.1	59 Pr 140.9	60 Nd 144.2	61 Pm (145)	62 Sm 150.3	63 Eu 152.0	64 Gd 157.2	65 Tb 158.9	66 Dy 162.5	67 Ho 164.9	68 Er 167.3	69 Tm 168.9	70 Yb 173.0	71 Lu 175.0				

<i>Actinides</i>																	
90 Th 232.0	91 Pa 231.0	92 U 238.0	93 Np 237.1	94 Pu (244)	95 Am (243)	96 Cm (247)	97 Bk (247)	98 Cf (251)	99 Es (254)	100 Fm (257)	101 Md (258)	102 No (255)	103 Lr (256)				



CHEMOLOGY EDUCATION SERVICES

Name: _____

CHEMISTRY EXAM 2 MULTIPLE CHOICE ANSWER SHEET

Colour the box after the letter corresponding to your answer.

1. **A**☐ **B**☐ **C**☐ **D**☐

2. **A**☐ **B**☐ **C**☐ **D**☐

3. **A**☐ **B**☐ **C**☐ **D**☐

4. **A**☐ **B**☐ **C**☐ **D**☐

5. **A**☐ **B**☐ **C**☐ **D**☐

6. **A**☐ **B**☐ **C**☐ **D**☐

7. **A**☐ **B**☐ **C**☐ **D**☐

8. **A**☐ **B**☐ **C**☐ **D**☐

9. **A**☐ **B**☐ **C**☐ **D**☐

10. **A**☐ **B**☐ **C**☐ **D**☐

11. **A**☐ **B**☐ **C**☐ **D**☐

12. **A**☐ **B**☐ **C**☐ **D**☐

13. **A**☐ **B**☐ **C**☐ **D**☐

14. **A**☐ **B**☐ **C**☐ **D**☐

15. **A**☐ **B**☐ **C**☐ **D**☐

16. **A**☐ **B**☐ **C**☐ **D**☐

17. **A**☐ **B**☐ **C**☐ **D**☐

18. **A**☐ **B**☐ **C**☐ **D**☐

19. **A**☐ **B**☐ **C**☐ **D**☐

20. **A**☐ **B**☐ **C**☐ **D**☐