



# THE SCHOOL FOR EXCELLENCE 2007

## UNIT 3 – CHEMISTRY

### WRITTEN EXAMINATION 1

Reading Time: 15 minutes  
Writing Time: 1 hour 30 minutes

### QUESTION AND ANSWER BOOK

#### Structure of Book

<i>Section</i>		<i>Number of Questions</i>	<i>Number of Questions to be Answered</i>	<i>Number of Marks</i>	<i>Suggested Times (min)</i>
A	Multiple choice questions	20	20	20	20
B	Short answer questions	7	7	70	70
				Total 90	Total 90

### COMPLIMENTS OF THE SCHOOL FOR EXCELLENCE

Voted Number One For Excellence and Quality in VCE Programs and Tutorials.

## THE SCHOOL FOR EXCELLENCE (TSFX)

The School For Excellence (**TSFX**) is a private educational institution that provides educational services to Year 11 and 12 students out of school hours. Our services include intense revision courses before examinations, intense weekly tuition classes, study skills lectures, as well as specialised courses that prepare students in advance of each school term.

The educational programs conducted by **TSFX** are widely recognised for providing the highest quality programs in Victoria today. Our programs are the result of more than 15 years of collaborative effort and expertise from dozens of teachers and schools across the state, ensuring the highest possible quality resources and teaching styles for VCE students.

For additional information, join our complimentary mailing list at [www.tsfx.com.au](http://www.tsfx.com.au). Alternatively, please call **TSFX** on (03) 9663 3311 during business hours.

### FREE VCE RESOURCES AT VCEDGE ONLINE

**VCEdge Online** is an educational resource designed to provide students the best opportunities to optimise their Year 11 or 12 scores. **VCEdge Online** members receive over \$300 worth of resources at no charge, including:

- Subject notes and course summaries.
- Sample A+ SACS and SATS.
- Trial examinations with worked solutions.
- Weekly study tips and exam advice (in the weeks leading up to the examinations)
- Two **FREE** tickets into an intense examination strategy lecture (valued at \$200!!!).
- Cheat sheets and formula cards.
- Critical VCE updates.
- Free VCE newsletters.
- Information on upcoming educational events.
- And much, much more!!!

**JOIN FREE OF CHARGE AT [WWW.TSFX.COM.AU](http://WWW.TSFX.COM.AU)**

## SECTION A

### Specific Instructions For Section A

Section A consists of 20 multiple-choice questions. Section A is worth approximately 22% of the marks available. You should spend approximately 20 minutes on this section.

Choose the response that is **correct** or **best answers the question**, and shade the square on the multiple-choice answer sheet according to the instructions on that sheet.

A correct answer is worth 1 mark, an incorrect answer is worth no marks. No mark will be given if more than one answer is shown for any question. Marks will **not** be deducted for incorrect answers. You should attempt every question.


#### Item 1

A 0.150 L flask contains Neon gas at 20.0° C and at atmospheric pressure. When the flask is heated to 40.0° C, the pressure of the gas will increase by a factor of

- A 0.3
- B 0.5
- C 2
- D 8

#### Item 2

4.86 g of magnesium reacts in excess dilute hydrochloric acid.



The volume of dry hydrogen gas evolved at 25° C and 101.3 kPa is

- A 2.45 L
- B 4.89 L
- C 9.79 L
- D 12.23 L

**Item 3**

5.00 g of  $\text{AgNO}_3$  and 10.00 g of  $\text{MgCl}_2$  were dissolved in 200.00 ml of water. Assuming that complete ionisation occurs, the number of ions in solution is

- A  $1.11 \times 10^{23}$
- B  $1.63 \times 10^{23}$
- C  $1.89 \times 10^{23}$
- D  $2.27 \times 10^{23}$

**Item 4**

The pH of a 0.1 M solution of acetic acid, which is a weak acid, is approximately

- A 1
- B 4
- C 10
- D 13

**Item 5**

20 ml of 0.20 M  $\text{HCl}$  reacts with 10 ml of 0.10 M sodium hydroxide solution. The pH of the resultant solution is closest to

- A 1
- B 3
- C 8
- D 11.5

**Item 6**

A compound is known to contain only sodium, sulphur and oxygen. A 100 g sample of the compound contains 17.04 g of sodium and 47.1 g of sulphur. The empirical formula of the compound is

- A  $\text{NaS}_2\text{O}_3$
- B  $\text{Na}_2\text{S}_4\text{O}_6$
- C  $\text{Na}_2\text{SO}_4$
- D  $\text{Na}_2\text{S}_2\text{O}_3$

**Item 7**

What is the percentage by mass of oxygen in hydrated iron oxide,  $Fe_2O_3 \cdot 2H_2O$ ?

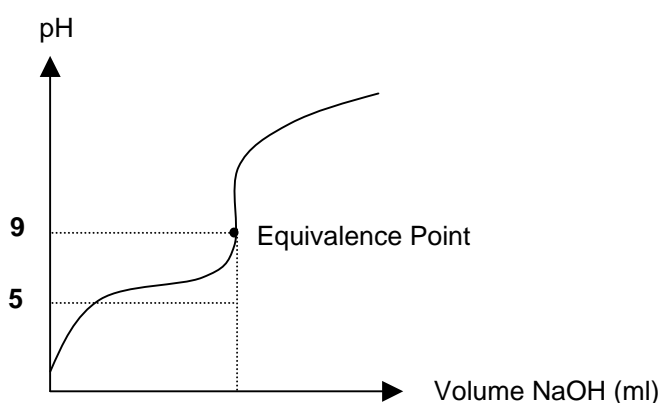
- A 25%
- B 27%
- C 30%
- D 41%

**The following information relates to Items 8 and 9.**

Benzoic acid, a weak acid, dissociates according to the following equation:



The diagram below shows the pH changes which occur when 20.0 ml of 0.100M benzoic acid is titrated with 0.200M sodium hydroxide solution.

**Item 8**

Methyl orange indicator changes colour from red to yellow between a pH of 2.1 and 4.4. How would the calculated concentration compare to the true value if methyl orange were used as the indicator for this reaction?

- A There would be no difference between the two concentrations.
- B The calculated concentration will be higher than the true value.
- C The calculated concentration will be lower than the true value.
- D The difference in concentrations cannot be determined from the given information.

**Item 9**

In another reaction, 20.0 ml of 0.100M hydrochloric acid is titrated with 0.200M sodium hydroxide.

How would the pH and volume of NaOH solution required to reach the equivalence point compare to that for the benzoic acid solution?

	pH at Equivalence Point	Volume at End Point
A	Lower	The Same
B	Lower	Lower
C	Higher	The Same
D	Higher	Lower

**Item 10**

Which one of the following reactions is **not** a redox process?

- A  $FeO_{(s)} + CO_{(g)} \rightarrow Fe_{(s)} + CO_{2(g)}$
- B  $C_6H_{12}O_{6(s)} + 6H_2SO_{4(l)} \rightarrow 6C_{(s)} + 6H_3O_{(aq)}^+ + 6HSO_{4(aq)}^-$
- C  $(NH_4)_2Cr_2O_{7(s)} \rightarrow N_{2(g)} + 4H_2O_{(g)} + Cr_2O_{3(s)}$
- D  $Cu_{(aq)}^{2+} + 2I_{(aq)}^- \rightleftharpoons CuI_{(s)} + \frac{1}{2}I_{2(aq)}$

**Item 11**

The oxidation number of nitrogen in  $NH_4NO_2$  is

- A 0
- B -3
- C +3
- D  $\pm 3$

**Item 12**

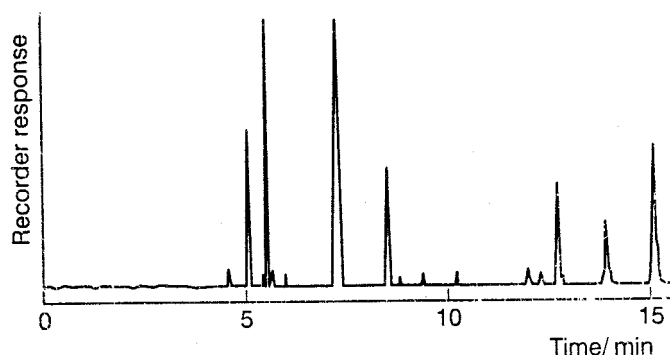
Which of the following statements relating to paper chromatography is incorrect?

- A  $R_f$  values increase as the temperature increases.
- B Better resolution of sample components may be obtained by increasing the length of the chromatogram.
- C Components of a sample separate due to differences in their rates of absorption and desorption.
- D Paper chromatography may be used to separate components of mixtures.

**Item 13**

A sample of a mixture of alcohols was analysed using Gas Chromatography. The spectrum obtained is given below. Which of the following statements is false?

- A The components separate according to their affinities for the two different phases.
- B The smallest molecular weight alcohol will have an  $R_T$  value of 15 minutes.
- C The area under each curve represents the amount of alcohol.
- D The gas used as the mobile phase in this process is most likely to be helium.

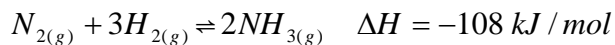
**Item 14**

According to Le Chatelier's principle, when disrupted by a change at constant temperature, an equilibrium system

- A Will restore original conditions.
- B Will not reach equilibrium again.
- C Will reach a new equilibrium but with a different value for the equilibrium constant,  $K$ .
- D Will reach a new equilibrium with the same value for the equilibrium constant,  $K$ .

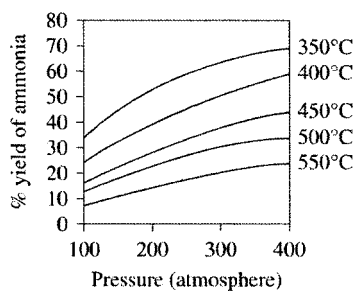
**Item 15**

Ammonia is produced on a large scale using the Haber Process.

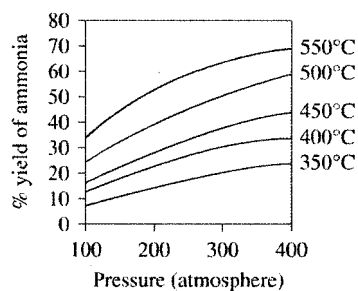


Which of the following graphs best describes how pressure and temperature affect the yield of ammonia produced?

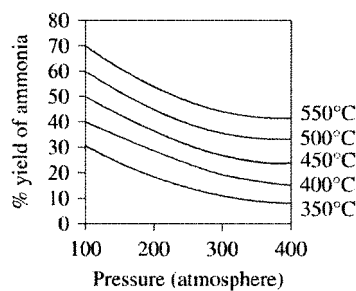
A



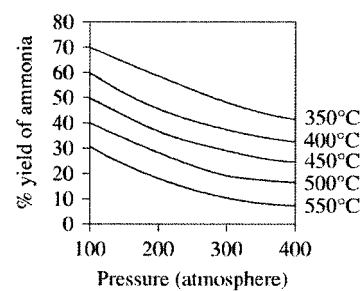
B



C



D





**Item 16**

The equilibrium constants for the reaction of 1 M  $HCl$  and 1 M  $CH_3COOH$  as equal volumes of acid are slowly added to 20.00 ml of water are given below.

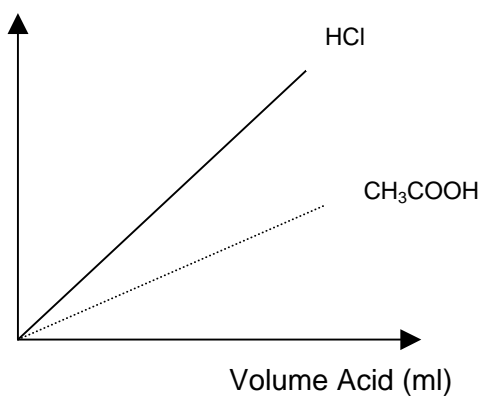
$$1\text{ M } HCl \quad K = 3 \times 10^{10}$$

$$1\text{ M } CH_3COOH \quad K = 2 \times 10^{-2}$$

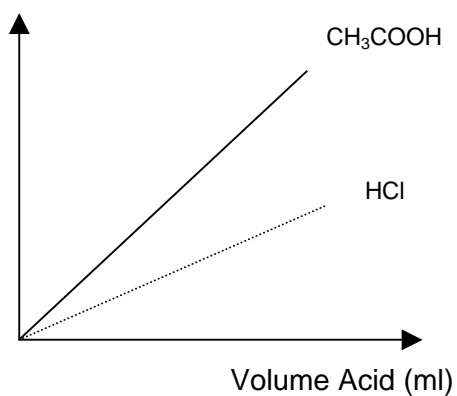
Which of the following graphs best describes the changes in electrical conductivity for each of the above reactions?

**A**

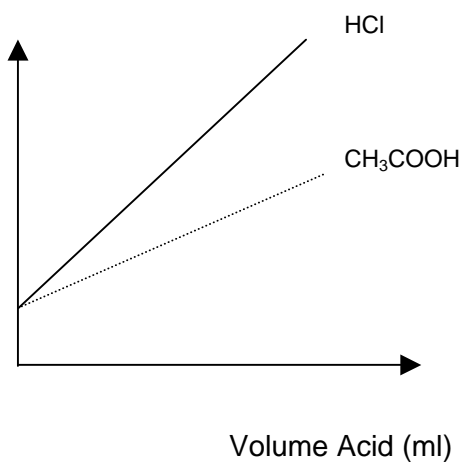
Conductivity

**B**

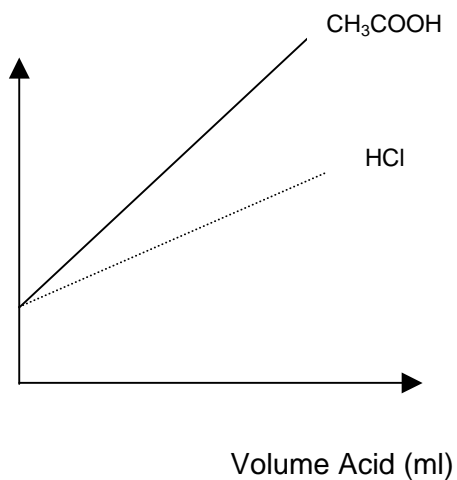
Conductivity

**C**

Conductivity

**D**

Conductivity



**Item 17**

The organic compound with the highest boiling point is

- A Propane
- B Propanoic acid
- C Propene
- D Propanol

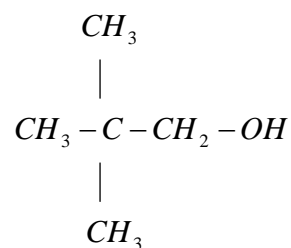
**Item 18**

The organic compound in with the lowest solubility in water is

- A Methanoic acid
- B Ethanoic acid
- C Propanoic acid
- D Butanoic acid

**Item 19**

The structural formula of a compound is



The systematic name of this compound is:

- A 2,2-dimethyl-1-propanol
- B 2,2-dimethyl-1-propanoic acid
- C 2,2-dimethyl-3-propanol
- D 2,2-dimethyl-3-propanoic acid

**Item 20**

2-methyl-2-butanol is an isomer of:

- A 2-butanol
- B pentanoic acid
- C 1-pentanol
- D 2,3-dimethyl-2-butanol

## SECTION B

### Specific Instructions For Section B

Section B consists of six short-answer questions numbered 1 to 6; you must answer all of these questions. This section is worth 70 marks which is approximately 78 per cent of the total available marks. You should spend approximately 70 minutes on this section.

The marks allotted to each question are shown at the end of each question.

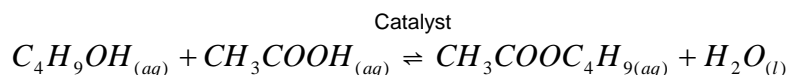
Questions must be answered in the spaces provided in this book.

To obtain full marks for your responses you should

- Give simplified answers with an appropriate number of significant figures for all numerical questions; unsimplified answers will not be given full marks.
- Show all working in your answers to numerical questions. No credit will be given for an incorrect answer unless it is accompanied by details of the working.
- Make sure that all chemical equations are balanced and that the formulas for individual substances include an indication of state (for example,  $H_{2(g)}$ ;  $NaCl_{(s)}$ ).

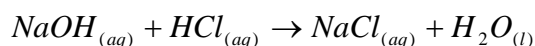
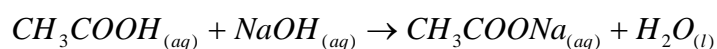
### QUESTION 1

The equation describing the production of butyl ethanoate is given below.



0.0500 mol of ethanoic acid and 0.0500 mol of butanol were allowed to reach equilibrium at  $90^{\circ}C$  for 2 hours, and then quickly cooled in an ice bath to  $25^{\circ}C$ . The reaction was carried out at a constant volume of  $1.00\text{ dm}^3$ .

$50.00\text{ cm}^3$  of  $1.00\text{ M NaOH}$  was added to the mixture, and was then titrated with  $1.00\text{ M}$  hydrochloric acid using phenolphthalein as the indicator.  
 $33.30\text{ cm}^3$  of acid was required for this reaction.



- a. (i) Calculate the amount, in mol, of  $NaOH$  that reacted with the  $1.00\text{ M}$  hydrochloric acid solution.

---

---

1 mark

- (ii) Calculate the amount, in mol, of  $CH_3COOH$  that reacted with the  $1.00\text{ M NaOH}$  solution.

---

---

---

---

2 marks

- (iii) Calculate the amount, in mol, of butanol,  $C_4H_9OH$ , that reacted in the initial mixture.

---

---

---

---

2 marks

(iv) Hence calculate the amount, in mol, of each species at equilibrium at  $25^{\circ}\text{C}$ .

---

---

---

---

2 marks

b. (i) Write an expression for the equilibrium constant for this reaction.

---

---

---

1 mark

(ii) Hence determine the equilibrium constant at  $25^{\circ}\text{C}$ .

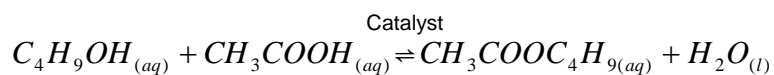
---

---

---

1 mark

c. The table below describes some features relating to the organic molecules involved in the production of butyl ethanoate.



	Molar Mass ( g / mol )	Boiling Point ( $^{\circ}\text{C}$ )
Ethanoic Acid	60.1	118.0
Butanol	74.1	117.3
Butyl ethanoate	116	126

(i) Explain how heating the equilibrium mixture to  $110^{\circ}\text{C}$  will improve the yield of ester.

---

---

---

---

---

---

2 marks

(ii) What catalyst is typically used in the production of esters and why?

---

---

1 mark

(ii) The reactants used to make small chain esters are highly soluble in aqueous solutions, but the esters themselves are not. Explain.

---

---

---

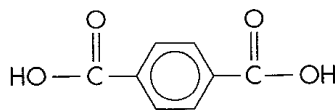
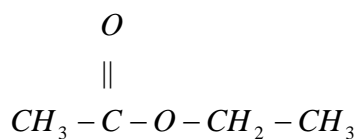
---

---

---

2 marks

d. Esters may be linked to produce long chains known as polyesters. Could the molecules below be used to produce a polyester? Explain your answer.



---

---

---

---

2 marks

**Total 16 marks**

## QUESTION 2

The equilibrium constant for the dissociation of a weak acid is described by the acidity constant,  $K_a$ . The equilibrium constant for the dissociation of a weak base is described in the same way using the term  $K_b$ .

- a. Calculate the hydroxide ion concentration that arises when  $0.100\text{ M}$  ammonia reacts with water, given that  $K_b$  for ammonia is  $1.79 \times 10^{-5}\text{ M}$  at  $25^\circ\text{C}$ .

---

---

---

---

---

---

---

---

---

---

3 marks

- b. Calculate the pH of a solution containing  $0.100\text{ M}$  of  $\text{NH}_3$  at  $25^\circ\text{C}$ .

---

---

---

---

2 marks

- c. Which species, ammonia or  $\text{OH}^-_{(aq)}$  is the stronger base?  
Give one reason for your answer.

---

---

---


---

2 marks

**Total 7 marks**

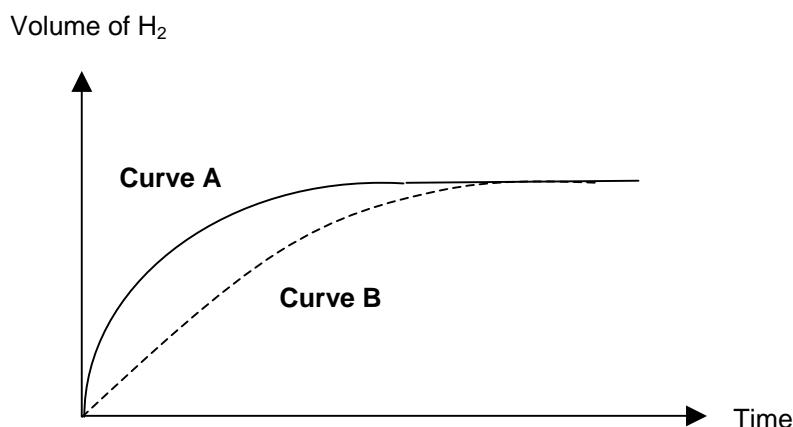
### QUESTION 3

5 cm of magnesium ribbon was added to 20 ml of 1.00 M hydrochloric acid in a closed system and the volume of hydrogen gas evolved at 10 second intervals was recorded.



The experiment was then repeated using a fresh 5 cm of magnesium ribbon, using 20 ml of 2.00 M hydrochloric acid.

The following graphs were obtained.



- a. (i) Which curve, A or B, best describes the reaction occurring in 2.00 M hydrochloric acid?

---

---

1 mark

- (ii) Give one reason why the two reactions produce the same volume of hydrogen.

---

---

---

1 mark



- b. 10 cm of magnesium ribbon was added separately to 20 ml of 1.00 M and 2.00 M hydrochloric acid in a closed system.

It was observed that in both cases, the initial rate of  $H_2$  evolution was increased as compared to when just 5 cm of magnesium ribbon was used. Explain why the greater mass of magnesium increased the reaction rate.

---

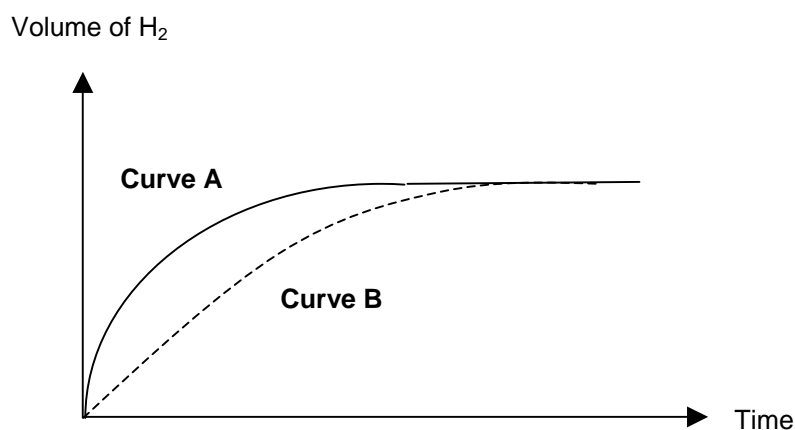
---

---

1 mark

- c. 5 cm of magnesium ribbon was added separately to 20 ml and 40 ml of 1.00 M hydrochloric acid at constant temperature in a closed vessel.

The following graphs were obtained.



Which curve, A or B, best describes the reaction occurring in the greater volume of hydrochloric acid? Give a reason for your answer.

---

---

---

---

---

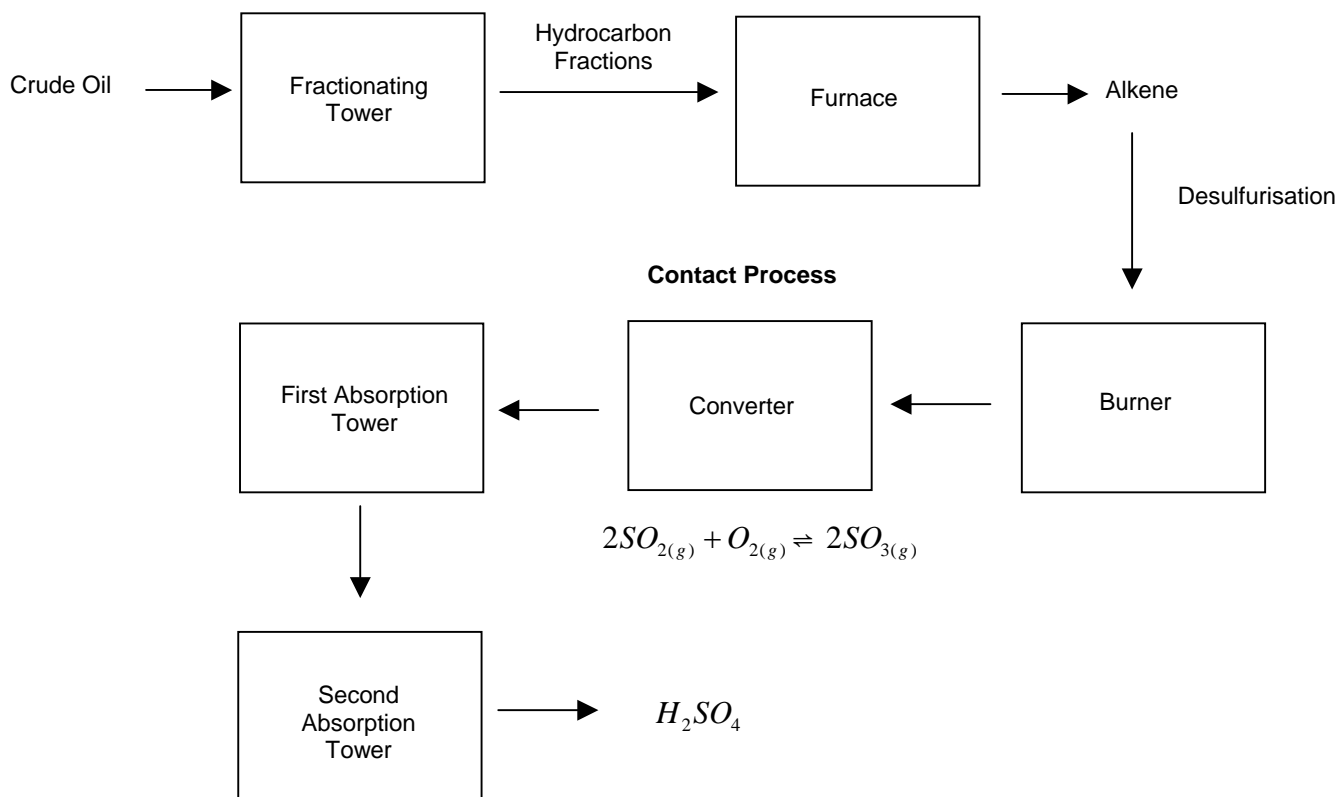
---

2 marks

**Total 5 marks**

#### QUESTION 4

Industries often exist as integrated complexes, being located within close proximity of one another. An schematic of an integrated industry is illustrated below.



One advantage of integrated industries lies in the fact that the by products of one industry can be used as a raw material for another industry; reducing wastage, environmental pollution and costs.

One example involves the desulfurisation process employed in petrochemical industries. The sulfur that is removed during the desulfurisation process is used as a raw material for the production of chemicals such as sulfuric acid.

- a. State one reason why desulfurisation is carried out before fractions are sent to a refinery.

---

---

---

1 mark

- b.** (i) Briefly explain how hydrocarbons are separated in the fractionating tower.

---

---

---

---

---

---

2 marks

- (ii) What process occurs in the Furnace?

---

---

1 mark

- (iii) Why does this process result in the production of unsaturated hydrocarbons such as ethene?

---

---

1 mark

- c.** (i) Give the name and molecular formula of the catalyst used in the converter.

---

---

1 mark

- (ii) Give the equation describing the process that occurs in the absorption towers.

---

---

1 mark

- (iii) Why is  $SO_{3(g)}$  passed through two absorption towers?

---

---

---

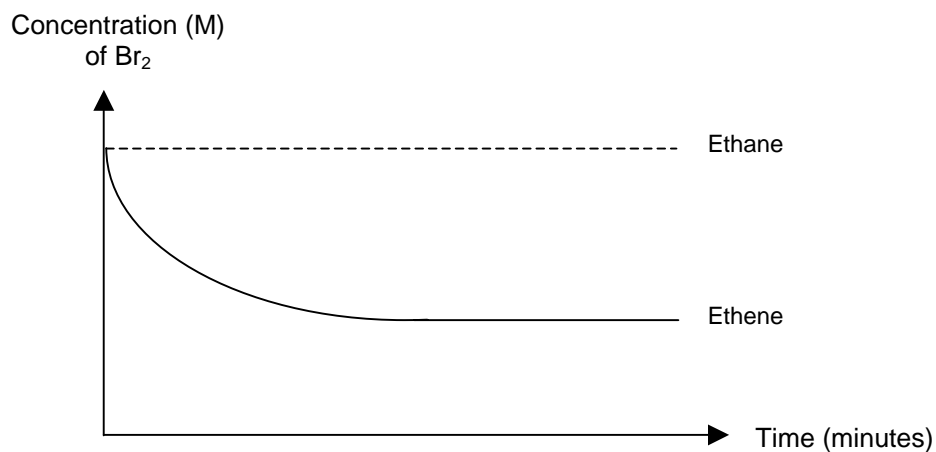
1 mark

**Total 8 marks**

### QUESTION 5

$\text{Br}_2$  is added to a sample of ethene, and separately, to a sample of ethane.

The variation in  $\text{Br}_{2(aq)}$  concentration was monitored using colorimetry, and the following graph was obtained.



- a. (i) Explain why the concentration of bromine decreases when it is reacted with ethene. In your answer, give an equation to describe the reaction occurring.

---

---

---

---

---

---

2 marks

- (ii) What needs to be added/introduced to the reaction mixture involving ethane before the concentration of bromine is observed to decrease.

---

---

1 mark

- b. Explain why alkanes and their corresponding alkenes have similar physical properties, but very different chemical properties.

---

---

---

---

2 marks

- c. (i) Write equations using structural formulae to illustrate the production of propanoic acid from propene. In your answer, give the name of any catalysts used in the process.

3 marks

- (ii) Ethene reacts in the presence of acidified  $MnO_4^-$  to produce  $C_2H_4(OH)_2$  and  $Mn^{2+}$ . Write the equation describing this reaction.

---

---

---

---

---

---

---

---

---

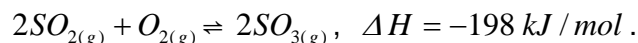
---

3 marks

**Total 11 marks**

### QUESTION 6

The oxidation of sulfur dioxide to sulfur trioxide is an equilibrium process described by the equation:



- a. (i) The pressure in the  $SO_{2(g)} / SO_{3(g)}$  equilibrium mixture is increased by halving the volume of the vessel keeping temperature constant. The mass of  $SO_2$  in the new equilibrium mixture will be

Higher than                      Lower than                      Equal to

the mass of  $SO_2$  in the initial equilibrium mixture. Circle the correct response from the options above.

1 mark

- (ii)  $O_2$  is added to the  $SO_{2(g)} / SO_{3(g)}$  equilibrium mixture at constant temperature and volume. The mass of  $SO_2$  in the new equilibrium mixture will be

Higher than                      Lower than                      Equal to

the mass of  $SO_2$  in the initial equilibrium mixture. Circle the correct response from the options above.

1 mark

- (iii) How does the addition of oxygen change the extent of the reaction?

---

---

---

1 mark

- b. (i) Oxygen is added to the equilibrium system at constant volume. As a result, the temperature of the reaction vessel should

Rise                      Fall                      Remain constant

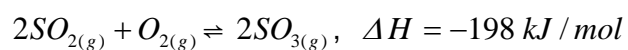
1 mark

- (i)  $SO_3$  is removed from the equilibrium system at constant temperature and volume. As the system re-establishes equilibrium, the rate of the forward reaction will

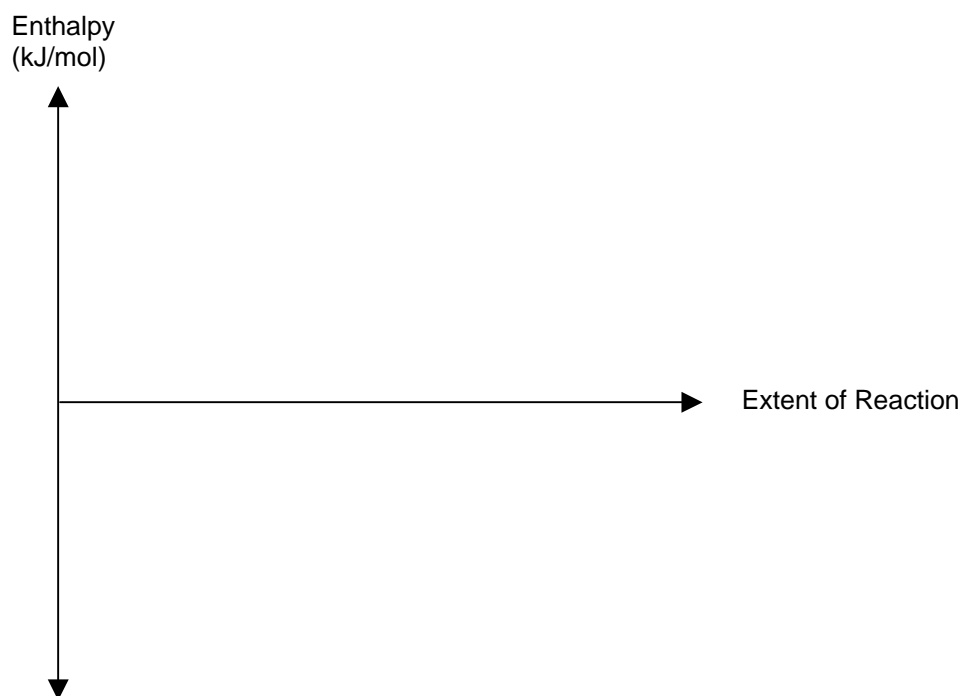
Increase                      Decrease                      Remain the same

1 mark

- c. (i) Draw a potential energy diagram for the reaction



given that the activation energy requirement is  $250 \text{ kJ/mol}$  and taking the enthalpy of the reactants as zero.



3 marks

- (ii) Calculate the activation energy for the reverse reaction.

---

---

---

1 mark

- (iii) Determine the enthalpy change for the reaction involving 1 mole of sulphur dioxide.

---

---

---

1 mark

**Total 10 marks**

### QUESTION 7

A brand of canned peaches claims that a 100.00 g serving contains 5.00 mg of sodium. Atomic Absorption Spectroscopy (AAS) was used to test this claim.

A 50.00 g sample of the peaches was treated with acids and other solvents in order to extract all of the sodium from the fruit. The resultant mixture was filtered producing 25.00 ml of filtrate. A 10 ml sample of this solution was diluted to 100.00 ml for analysis.

The absorption of the diluted peach solution and of several standard solutions were measured under identical conditions. The results are shown in the table below.

Sodium Concentration (ppm)	Absorbance Reading
0	0.000
5	0.160
10	0.360
15	0.500
20	0.660
Test Sample	0.420

- a. (i) Apart from the cathode lamp, state the names of two (2) important component "parts" found within an atomic absorption spectrophotometer.

---

---

1 mark

- (ii) Briefly describe the function of one of these components in i. above.

---

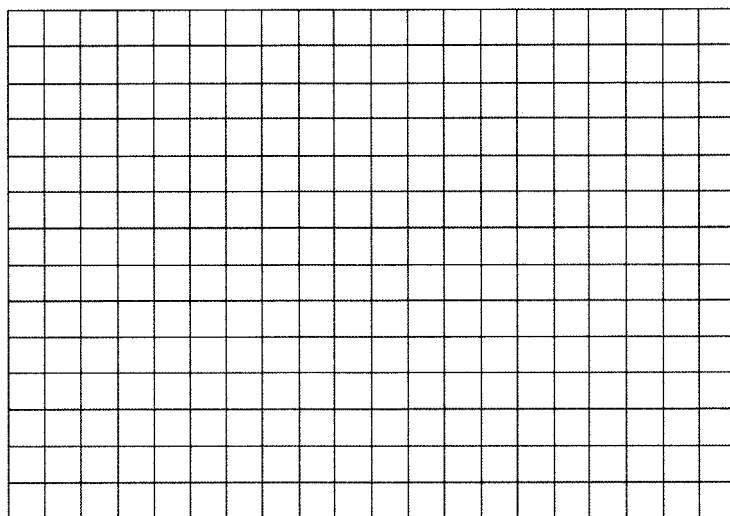
---

---

1 mark



- b. (i) Use the given data to sketch a calibration curve.



2 marks

- (ii) Calculate the concentration of sodium in the undiluted sample in *ppm*.

---

---

1 mark

- c. (i) By what percentage does the calculated concentration in *mg / 100 g* of sodium differ from the stated claim?

---

---

---

---

---

---

---

---

---

---

3 marks

- (ii) If the sodium in peaches is present as  $\text{NaCl}$ , calculate the mass of  $\text{NaCl}$  per 100.00 g of peach.

---

---

---

---

---

---

---

---

---

---

3 marks

- d. The concentration of lead in peaches may also be determined by atomic absorption spectroscopy. After the peach solution has been tested for sodium, some changes need to be made to test for lead.

- (i) State one change that would need to be made to the set up of the atomic absorption spectrometer.

---

---

---

1 mark

- (ii) State one change that would need to be made to the calibration of the atomic absorption spectrometer.

---

---

---

1 mark

**Total 13 marks**

**END OF PAPER**