

SPECIALIST MATHEMATICS UNITS 3 & 4

TRIAL EXAMINATION 2

2019

Reading Time: 15 minutes

Writing time: 2 hours

Instructions to students

This exam consists of Section A and Section B.
Section A consists of 20 multiple-choice questions and should be answered on the detachable answer sheet which can be found on page 26 of this exam.
Section B consists of 6 extended-answer questions.
Section A begins on page 2 of this exam and is worth 20 marks.
Section B begins on page 10 of this exam and is worth 60 marks.
There is a total of 80 marks available.
All questions in Section A and B should be answered.
In Section B, where more than one mark is allocated to a question, appropriate working must be shown.
An exact value is required to a question unless otherwise directed.
Unless otherwise stated, diagrams in this exam are not drawn to scale.
The acceleration due to gravity should be taken to have magnitude $g \text{ m/s}^2$ where $g = 9.8$
Students may bring one bound reference into the exam.
Students may bring into the exam one approved technology (calculator or software) and, if desired, one scientific calculator. Calculator memory does not need to be cleared. For approved computer-based CAS, full functionality may be used.
A formula sheet can be found on pages 23-25 of this exam.

This paper has been prepared independently of the Victorian Curriculum and Assessment Authority to provide additional exam preparation for students. Although references have been reproduced with permission of the Victorian Curriculum and Assessment Authority, the publication is in no way connected with or endorsed by the Victorian Curriculum and Assessment Authority.

© THE HEFFERNAN GROUP 2019

This Trial Exam is licensed on a non transferable basis to the purchasing school. It may be copied by the school which has purchased it. This license does not permit distribution or copying of this Trial Exam by any other party.

SECTION A – Multiple-choice questions

Question 1

The implied range of $y = \tan^{-1}\left(\frac{x}{a}\right)$ is

- A. $(-a, a)$
- B. $(0, a)$
- C. $\left(-\frac{\pi}{2}, \frac{\pi}{2}\right)$
- D. $(0, \pi)$
- E. R

Question 2

Let A , B , C and D represent non-zero rational numbers.

The expression $\frac{x^2 - 2}{(x-1)^2(x^2 + 2)}$ can be represented in partial fraction form as

- A. $\frac{A}{x-1} + \frac{B}{x^2 + 2}$
- B. $\frac{Ax+B}{(x-1)^2} + \frac{Cx+D}{x^2 + 2}$
- C. $\frac{A}{(x-1)^2} + \frac{Bx+D}{x^2 + 2}$
- D. $\frac{A}{x-1} + \frac{B}{x-1} + \frac{Cx+D}{x^2 + 2}$
- E. $\frac{A}{x-1} + \frac{B}{(x-1)^2} + \frac{Cx+D}{x^2 + 2}$

Question 3

Let $z = 3\text{cis}\left(\frac{\pi}{5}\right)$.

$\text{Arg}(z^6)$ is equal to

- A. $\left(\frac{\pi}{5}\right)^6$
- B. $-\frac{4\pi}{5}$
- C. $\frac{4\pi}{5}$
- D. $\frac{5\pi}{6}$
- E. $\frac{6\pi}{5}$

Question 4

Consider the complex numbers $2z$, $-iz$ and $2z - iz$, where $z \in \mathbb{C} \setminus \{0\}$.

These three complex numbers are plotted in the Argand plane and together with the origin O , they form the vertices of a quadrilateral.

The area of this quadrilateral is

- A. $\frac{1}{|2z|}$
- B. $|2z|$
- C. $|z^2|$
- D. $2|z|^2$
- E. $|z| + |2z|$

Question 5

The complex number z_1 is a solution to the equation $z^n = 1 + \sqrt{3}i$, where n is a positive integer.

Which one of the following cannot be true?

- A. $|z_1| = \sqrt{2}$
- B. $\text{Arg}(z_1) = 0$
- C. $|z_1| = 2$
- D. $\text{Arg}(z_1) = \frac{7\pi}{9}$
- E. $|z_1| = \sqrt[3]{2}$

Question 6

The length of the curve defined by the parametric equations $x = \sqrt{t}$ and $y = e^{2t}$, where $0 \leq t \leq 3$, is closest to

- A. 17.0
- B. 31.2
- C. 205.7
- D. 368.2
- E. 402.7

Question 7

Using a suitable substitution, $\int_{-2}^0 (x+2)\sqrt{1-x} \, dx$ can be written as

- A. $\int_1^3 (u^{\frac{3}{2}} - 3u^{\frac{1}{2}}) \, du$
- B. $\int_1^3 (3u^{\frac{1}{2}} - u^{\frac{3}{2}}) \, du$
- C. $\int_1^3 (u^{\frac{1}{2}} - u^{\frac{3}{2}}) \, du$
- D. $\int_0^2 (u^{\frac{1}{2}} - u^{\frac{3}{2}}) \, du$
- E. $\int_0^2 (u^{\frac{3}{2}} - 3u^{\frac{1}{2}}) \, du$

Question 8

Consider the differential equation $\frac{dy}{dx} = 15\sqrt{x}(x+2)$, where $y(1) = y_0 = 26$.

Using Euler's method with a step size of 0.2, an approximation to $y(0.6) = y_2$ is given by

- A. 9.5
- B. 10.3
- C. 17.0
- D. 35.0
- E. 42.5

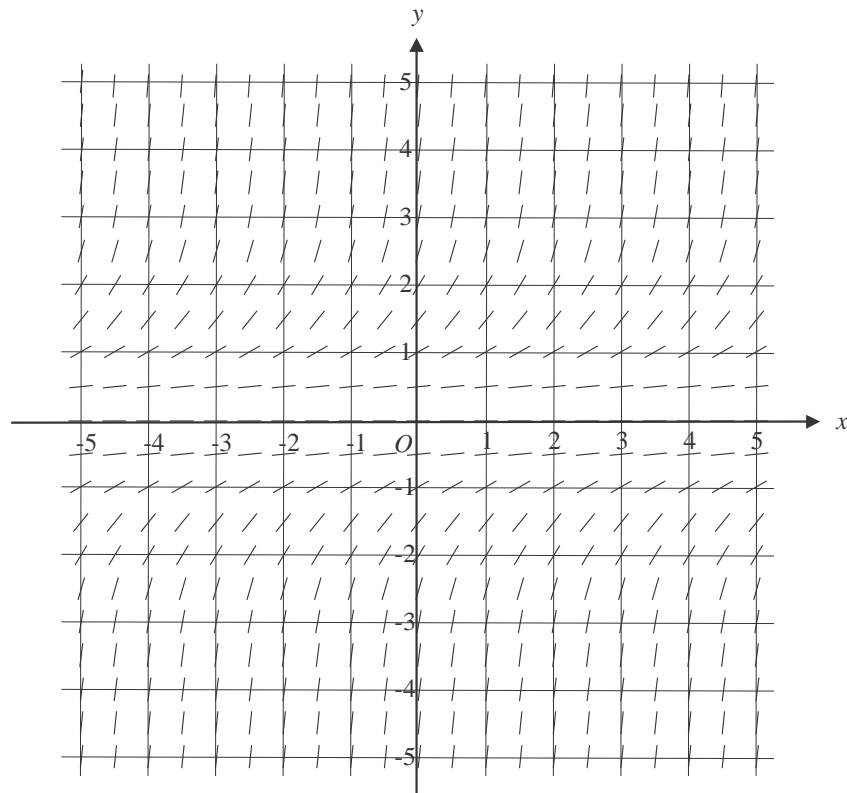
Question 9

Consider the function f for which $f'(x) < 0$ and $f''(x) < 0$ over its entire domain.

The function $f(x)$ and its gradient function $f'(x)$ would, over this domain, be

- A. both strictly decreasing.
- B. both strictly decreasing and the graph of f would have a non-stationary point of inflection.
- C. strictly increasing and strictly decreasing respectively
- D. both strictly increasing
- E. both strictly increasing and the graph of f would have a non-stationary point of inflection.

Question 10

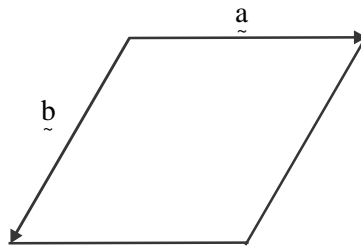


The differential equation that best represents the direction field above is

- A. $\frac{dy}{dx} = x^2 + y$
- B. $\frac{dy}{dx} = x^2$
- C. $\frac{dy}{dx} = y^2$
- D. $\frac{dy}{dx} = x - y^2$
- E. $\frac{dy}{dx} = x + y$

Question 11

The diagram below shows a rhombus which is spanned by the two vectors \vec{a} and \vec{b}



Which one of the following statements is **false**?

- A. $|\vec{a}| = |\vec{b}|$
- B. $\vec{a} \cdot \vec{b} < 0$
- C. $|\vec{a}| = |-\vec{b}|$
- D. $|\vec{a}| + |\vec{b}| = 0$
- E. $(\vec{a} - \vec{b}) \cdot (\vec{a} + \vec{b}) = 0$

Question 12

Let $\vec{a} = 2\vec{i} - 3\vec{j} + \vec{k}$ and $\vec{b} = -\vec{i} + 2\vec{j} - 2\vec{k}$.

The vector resolute of \vec{a} perpendicular to \vec{b} is

- A. $\frac{1}{9}(8\vec{i} - 7\vec{j} - 11\vec{k})$
- B. $-\frac{5}{3}$
- C. $\frac{10}{3}(-\vec{i} + 2\vec{j} - 2\vec{k})$
- D. $\frac{8}{9}$
- E. $\frac{10}{9}(-\vec{i} + 2\vec{j} - 2\vec{k})$

Question 13

The position vectors of two speed boats A and B after time t hours are given by

$$\vec{r}_A(t) = t\vec{i} + (4+t)\vec{j} \quad \text{and} \quad \vec{r}_B(t) = (t+2)\vec{i} + (3-t)\vec{j}, \quad t \geq 0$$

where displacement is measured in kilometres from a given reference point on the water. The period of time, in hours, when the two speed boats are within 2.5 km of one another is closest to

- A. 0.25
- B. 0.5
- C. 1.25
- D. 1.5
- E. 1.625

Question 14

The circular path of a particle moving in the Cartesian plane is given by

$$\vec{r}(t) = 3\sin(t)\vec{i} + \sqrt{a}\cos(t)\vec{j} \quad \text{where } t \text{ is the time in seconds, } t \geq 0 \text{ and } a \in \mathbb{R}^+.$$

The direction of motion of the particle when $t = \frac{\pi}{2}$ is

- A. $-3\vec{i}$
- B. $-3\vec{j}$
- C. $3\vec{i}$
- D. $3\vec{j}$
- E. $9\vec{i}$

Question 15

The initial velocity of a particle with mass 4 kg is $(3\vec{i} - 5\vec{j}) \text{ ms}^{-1}$.

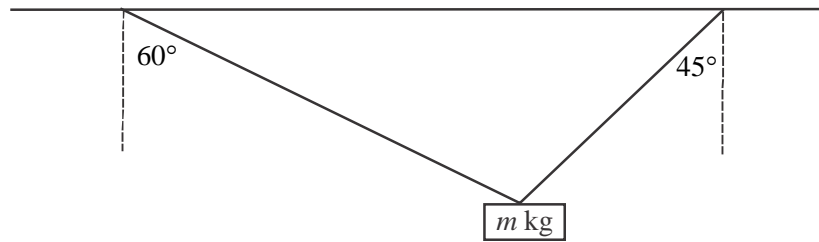
This particle has a change of momentum of $(-20\vec{i} + 44\vec{j}) \text{ kg ms}^{-1}$.

The velocity of the particle, in ms^{-1} , is now

- A. $-2\vec{i} + 6\vec{j}$
- B. $-2\vec{i} + 16\vec{j}$
- C. $-8\vec{i} + 24\vec{j}$
- D. $-17\vec{i} + 39\vec{j}$
- E. $-32\vec{i} + 96\vec{j}$

Question 16

A mass of m kg is suspended from a horizontal bar by two light inextensible strings as shown in the diagram below.



The longer string makes an angle of 60° with the vertical and has tension of $\sqrt{6}$ newtons.
 The shorter string makes an angle of 45° with the vertical.
 The value of m is

- A. $\frac{\sqrt{6}}{g}$
- B. $\frac{3}{g}$
- C. $\frac{\sqrt{3}+3}{\sqrt{2}}$
- D. $\frac{\sqrt{3}(\sqrt{2}+1)}{2}$
- E. $\frac{\sqrt{2}(\sqrt{3}+3)}{2g}$

Question 17

A mass of 5 kg is acted on by a variable force of F newtons and as a result the mass moves in a straight line.

At time t seconds, $t \geq 0$, the velocity of the mass, v metres per second, and its position, x metres from the origin, are given by $v = 1 + 2x$.

The variable force F is equal to

- A. 10
- B. $4x + 2$
- C. $20x + 10$
- D. $5x^2 + 5x$
- E. $\frac{10}{3}x^3 + 5x^2 + \frac{5}{2}x$

Question 18

The weights of a population of sea birds are known to be normally distributed with a mean mass of 5.2 kg and a standard deviation of 0.4 kg.

Seven of these birds, chosen at random, are captured and weighed.

The probability that the average weight of these captured birds is less than 5 kg is closest to

- A. 0.0002
- B. 0.0041
- C. 0.0929
- D. 0.3085
- E. 0.9072

Question 19

The standard deviation of the battery life, in hours, for a particular brand of power tool is 15 hours.

A 95% confidence interval for the mean battery life, in hours, of this brand of power tool is (68.1, 72.3).

The number of power tools in the sample used to calculate this confidence interval is

- A. 7
- B. 14
- C. 49
- D. 196
- E. 225

Question 20

Annual rainfall in the towns of Alban and Beachtown is normally distributed.

The mean and standard deviation of the annual rainfall, in millimetres, in Alban is 310 and 10 respectively.

For Beachtown, the mean and standard deviation of the annual rainfall, in millimetres, is 640 and 25 respectively.

The annual rainfall in Alban is independent of the annual rainfall in Beachtown.

In a randomly chosen year, the probability that Beachtown will have more than double the annual rainfall of Alban is closest to

- A. 0.7339
- B. 0.8241
- C. 0.8735
- D. 0.9012
- E. 0.9088

SECTION B

Question 1 (10 marks)

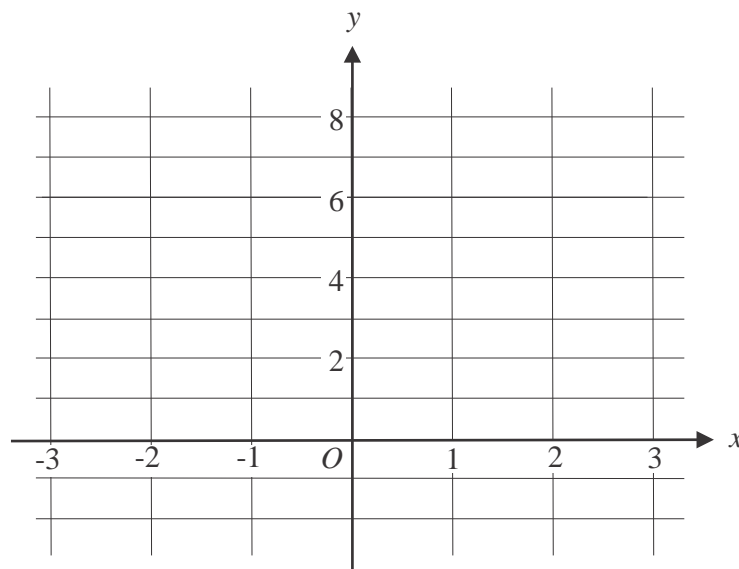
Consider the function f with rule $f(x) = 5 \arccos((x-1)^2)$.

- a. Given that $f'(x) = \frac{ax-a}{\sqrt{b-(x-b)^c}}$, where a , b and c are integers, find the values of a , b and c .

2 marks

- b. Sketch the graph of f over its maximal domain on the set of axes below. Label any endpoints and stationary points with their coordinates.

3 marks



- c.** The region enclosed by that part of the graph of f for which $x \in [0,1]$, the line $y = \frac{5\pi}{2}$ and the y -axis, is rotated about the y -axis to form a solid of revolution.

- i.** Write down a definite integral, in terms of x , that gives the length of the curve described above that is used to form the solid of revolution. 1 mark

- ii.** Find the length of this curve, correct to two decimal places. 1 mark

- iii.** Write down a definite integral, in terms of y , that gives the volume of the solid of revolution formed. 2 marks

- iv.** Find the volume of the solid formed, in cubic units, correct to two decimal places. 1 mark

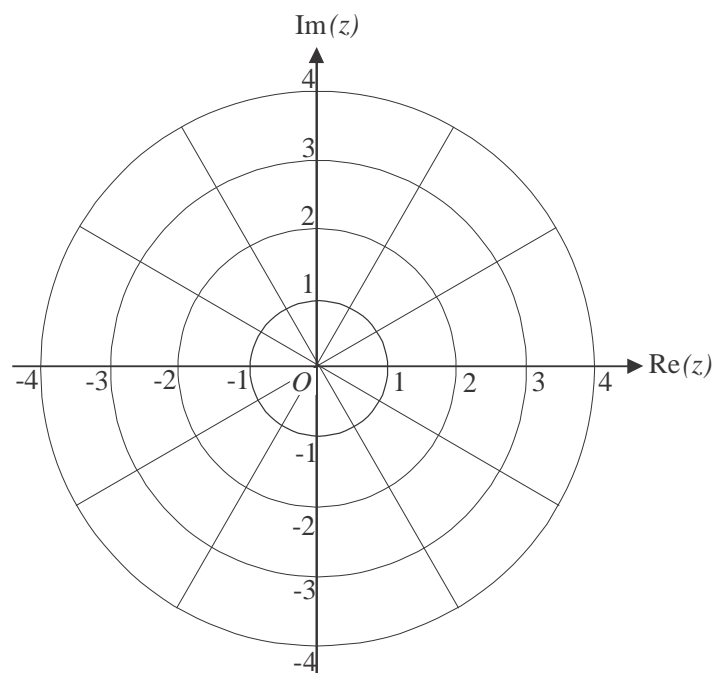
Question 2 (9 marks)

The relation S , in the complex plane, is given by $|z - \sqrt{2} - \sqrt{2}i| = \sqrt{2}$.

- a.** Show that the Cartesian equation of S is $(x - \sqrt{2})^2 + (y - \sqrt{2})^2 = 2$. 1 mark

- b.** Find, in Cartesian form, the point(s) of intersection of S and the graph of the relation $z\bar{z} = 2$. 2 marks

- c.** On the Argand diagram below, sketch S and the graph of the relation $z\bar{z} = 2$. 2 marks



- d. A ray with equation $\text{Arg}(z) = \alpha\pi$, $\alpha \in R$, intersects the graph of S **and** the graph of the relation $z\bar{z} = 2$.
Write down the possible values of α . 2 marks

- e. Find the common area enclosed by the graph of S and the graph of the relation $z\bar{z} = 2$. 2 marks

Question 3 (9 marks)

A tank initially contains 10 kg of sugar dissolved in 100 litres of water.

Water flows into the tank at the rate of 6 litres per minute.

The solution in the tank is kept uniform by stirring and flows out of the tank at the rate of 2 litres per minute.

Let x represent the amount of sugar, in kilograms, present in the tank after t minutes.

- a.** Show that the differential equation relating x and t is $\frac{dx}{dt} = \frac{-x}{50+2t}$. 1 mark

- b.** Hence show that $x = \frac{50}{\sqrt{25+t}}$. 3 marks

A second tank initially contains 10 kg of sugar dissolved in 400 litres of water. The solution is kept uniform by stirring and flows out of the tank at the rate of 4 litres per minute.

Let s represent the amount of sugar, in kilograms, in this second tank after t minutes.

The differential equation relating s and t is given by $\frac{ds}{dt} = \frac{-s}{100-t}$.

- c. Verify that $s = 10 - \frac{t}{10}$ satisfies both the differential equation and initial conditions given above.

2 marks

- d. How many minutes does it take for the tank to be emptied of the sugar solution?

1 mark

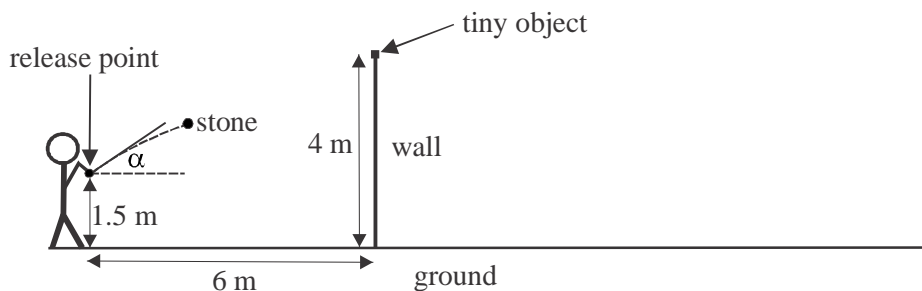
- e. Show that the concentration of sugar in the sugar solution, in kg per litre, is constant throughout the emptying of the tank.

2 marks

Question 4 (11 marks)

Jack throws a stone which he hopes will hit a tiny object sitting on top of a 4 m high wall. The point at which he releases the stone is 6 m horizontally from the wall and 1.5 m above the horizontal ground.

The angle of projection is α to the horizontal, where $0 < \alpha < 90^\circ$, and the speed of the stone when it is released is 15 ms^{-1} . Air resistance can be taken as negligible.



The position vector of the stone at time t seconds, $t \geq 0$, relative to the release point is given by $\underline{r}(t) = 15t \cos(\alpha) \underline{i} + (15t \sin(\alpha) - 4.9t^2) \underline{j}$ where \underline{i} is a unit vector in the horizontal direction of motion and \underline{j} is a unit vector vertically upwards. Displacement is measured in metres.

- a.** Jack throws the stone with an angle of projection of 60° .
- i.** Find the time, in seconds, when the stone is 6 m horizontally from its release point. 1 mark

 - ii.** Hence show that the stone does not hit the tiny object. 1 mark

 - iii.** How far vertically above the tiny object does the stone pass? Give your answer in metres correct to two decimal places. 2 marks

- iv. What is the speed of the stone when it is vertically above the tiny object?
Give your answer in ms^{-1} correct to one decimal place. 2 marks

Jack's friend Tom throws an identical stone from the same position where Jack threw his stone.

The speed at which Tom releases his stone is 15 ms^{-1} and he manages to hit the tiny object.

- b. Find the possible angles of projection, α , for Tom's throw.
Give your answer in degrees correct to one decimal place. 3 marks

After having skimmed the top of the wall and hit the tiny object, Tom's stone continues on its original path before landing on the ground on the **opposite** side of the wall from where it was thrown.

Its distance from the base of the wall is now 16.4228 m.

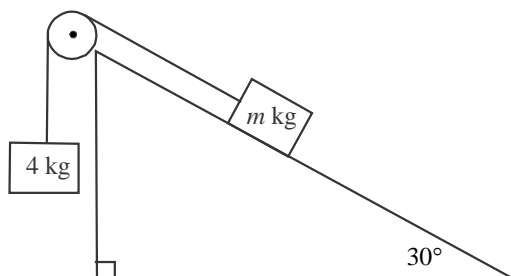
- c. What was the angle of projection of Tom's throw? Give your answer in degrees correct to one decimal place. 2 marks

Question 5 (11 marks)

A mass of m kg rests on a smooth plane inclined at an angle of 30° to the horizontal. It is connected by a light inextensible string that passes over a smooth pulley to a second mass of 4 kg. The system is in equilibrium.

- a. Show all the forces acting on each of the masses.

2 marks



- b. Find the value of m .

1 mark

A tank containing a liquid is placed beneath the 4 kg mass so that the mass is touching the surface of the liquid.

The string joining the two masses is cut and the 4 kg mass sinks vertically into the liquid.

The liquid exerts a resistance of $2v$ newtons to the motion, where $v \text{ ms}^{-1}$ is the velocity of the 4 kg mass t seconds after the string is cut.

- c. Show that $a = g - \frac{v}{2}$ where $a \text{ ms}^{-2}$ is the acceleration of the 4 kg mass when its velocity is $v \text{ ms}^{-1}$.

1 mark

- d.** Find an expression for the time t , in seconds since the string was cut, as a function of the velocity v , of the 4 kg mass as it sinks.

Give your answer in the form $t = b \log_e \left(\frac{bg}{bg - v} \right)$ where $b \in R$.

2 marks

- e.** Find the limiting (terminal velocity) of the 4 kg mass.

1 mark

- f.** The 4 kg mass reaches the bottom of the tank three seconds after the string is cut. How deep is the liquid in the tank? Give your answer in metres correct to one decimal place.

2 marks

- g.** Find how far the 4 kg mass is below the surface of the liquid when its velocity is $g \text{ ms}^{-1}$. Give your answer in metres correct to one decimal place. 2 marks

Question 6 (10 marks)

A company produces small muffins and large muffins.

The weight of the small muffins is normally distributed with a mean of 108 grams and a standard deviation of two grams.

The weight of a large muffin is twice the weight of a small muffin.

- a.** Find the mean and the standard deviation of the weight of a large muffin. 2 marks

Small muffins are sold to retailers in boxes of 25.

- b.** Find the mean and the standard deviation of the weight of a box of small muffins. (Assume that the packaging weight is negligible). 2 marks

- c.** Find the probability that a randomly selected box containing 25 small muffins will weigh less than 2680 grams. Give your answer correct to three decimal places. 1 mark

The company also produces mud cakes. The weight of these mud cakes is normally distributed with a standard deviation of 20 grams.

The company claims that the mean weight of their mud cakes is 450 grams.

A food regulation authority suspects that the mud cakes are underweight and takes a sample of 30 of them.

The mean weight of the cakes in the sample is 440 grams.

A one-tailed statistical test is carried out to test whether the sample mean weight is significantly less than the weight claimed by the company.

- d.** State two hypotheses that should be used in this statistical test. 1 mark

- e. Write down an expression for the p value for the test and evaluate it correct to four decimal places. 2 marks

- f. State whether H_0 should be rejected at the 5% level of significance. Give a reason for your answer. 1 mark

- g. What is the largest value of the sample mean that could provide evidence, at the 5% level of significance, that the mud cakes produced by the company are underweight? Give your answer correct to one decimal place. 1 mark

Specialist Mathematics Formulas

Mensuration

area of a trapezium	$\frac{1}{2}(a+b)h$
curved surface area of a cylinder	$2\pi rh$
volume of a cylinder	$\pi r^2 h$
volume of a cone	$\frac{1}{3}\pi r^2 h$
volume of a pyramid	$\frac{1}{3}Ah$
volume of a sphere	$\frac{4}{3}\pi r^3$
area of a triangle	$\frac{1}{2}bc \sin(A)$
sine rule	$\frac{a}{\sin(A)} = \frac{b}{\sin(B)} = \frac{c}{\sin(C)}$
cosine rule	$c^2 = a^2 + b^2 - 2ab \cos(C)$

Circular functions

$\cos^2(x) + \sin^2(x) = 1$	
$1 + \tan^2(x) = \sec^2(x)$	$\cot^2(x) + 1 = \operatorname{cosec}^2(x)$
$\sin(x+y) = \sin(x)\cos(y) + \cos(x)\sin(y)$	$\sin(x-y) = \sin(x)\cos(y) - \cos(x)\sin(y)$
$\cos(x+y) = \cos(x)\cos(y) - \sin(x)\sin(y)$	$\cos(x-y) = \cos(x)\cos(y) + \sin(x)\sin(y)$
$\tan(x+y) = \frac{\tan(x) + \tan(y)}{1 - \tan(x)\tan(y)}$	$\tan(x-y) = \frac{\tan(x) - \tan(y)}{1 + \tan(x)\tan(y)}$
$\cos(2x) = \cos^2(x) - \sin^2(x) = 2\cos^2(x) - 1 = 1 - 2\sin^2(x)$	
$\sin(2x) = 2\sin(x)\cos(x)$	$\tan(2x) = \frac{2\tan(x)}{1 - \tan^2(x)}$

Mathematics Formula Sheets reproduced by permission; © VCAA 2019. The VCAA does not endorse or make any warranties regarding this study resource. Past VCAA VCE® exams and related content can be accessed directly at www.vcaa.vic.edu.au

Circular functions – continued

Function	\sin^{-1} or arcsin	\cos^{-1} or arccos	\tan^{-1} or arctan
Domain	$[-1, 1]$	$[-1, 1]$	R
Range	$\left[-\frac{\pi}{2}, \frac{\pi}{2}\right]$	$[0, \pi]$	$\left(-\frac{\pi}{2}, \frac{\pi}{2}\right)$

Algebra (complex numbers)

$z = x + iy = r(\cos(\theta) + i \sin(\theta)) = r \operatorname{cis}(\theta)$	
$ z = \sqrt{x^2 + y^2} = r$	$-\pi < \operatorname{Arg}(z) \leq \pi$
$z_1 z_2 = r_1 r_2 \operatorname{cis}(\theta_1 + \theta_2)$	$\frac{z_1}{z_2} = \frac{r_1}{r_2} \operatorname{cis}(\theta_1 - \theta_2)$
$z^n = r^n \operatorname{cis}(n\theta)$ (de Moivre's theorem)	

Probability and statistics

for random variables X and Y	$E(aX + b) = aE(x) + b$ $E(aX + bY) = aE(x) + bE(Y)$ $\operatorname{var}(aX + b) = a^2 \operatorname{var}(X)$
for independent random variables X and Y	$\operatorname{var}(aX + bY) = a^2 \operatorname{var}(X) + b^2 \operatorname{var}(Y)$
approximate confidence interval for μ	$\left(\bar{x} - z \frac{s}{\sqrt{n}}, \bar{x} + z \frac{s}{\sqrt{n}} \right)$
distribution of sample mean \bar{X}	mean $E(\bar{X}) = \mu$ variance $\operatorname{var}(\bar{X}) = \frac{\sigma^2}{n}$

Calculus

$\frac{d}{dx}(x^n) = nx^{n-1}$	$\int x^n dx = \frac{1}{n+1}x^{n+1} + c, n \neq -1$
$\frac{d}{dx}(e^{ax}) = ae^{ax}$	$\int e^{ax} dx = \frac{1}{a}e^{ax} + c$
$\frac{d}{dx}(\log_e(x)) = \frac{1}{x}$	$\int \frac{1}{x} dx = \log_e x + c$
$\frac{d}{dx}(\sin(ax)) = a \cos(ax)$	$\int \sin(ax) dx = -\frac{1}{a}\cos(ax) + c$
$\frac{d}{dx}(\cos(ax)) = -a \sin(ax)$	$\int \cos(ax) dx = \frac{1}{a}\sin(ax) + c$
$\frac{d}{dx}(\tan(ax)) = a \sec^2(ax)$	$\int \sec^2(ax) dx = \frac{1}{a}\tan(ax) + c$
$\frac{d}{dx}(\sin^{-1}(x)) = \frac{1}{\sqrt{1-x^2}}$	$\int \frac{1}{\sqrt{a^2-x^2}} dx = \sin^{-1}\left(\frac{x}{a}\right) + c, a > 0$
$\frac{d}{dx}(\cos^{-1}(x)) = \frac{-1}{\sqrt{1-x^2}}$	$\int \frac{-1}{\sqrt{a^2-x^2}} dx = \cos^{-1}\left(\frac{x}{a}\right) + c, a > 0$
$\frac{d}{dx}(\tan^{-1}(x)) = \frac{1}{1+x^2}$	$\int \frac{a}{a^2+x^2} dx = \tan^{-1}\left(\frac{x}{a}\right) + c$
	$\int (ax+b)^n dx = \frac{1}{a(n+1)}(ax+b)^{n+1} + c, n \neq -1$
	$\int (ax+b)^{-1} dx = \frac{1}{a}\log_e ax+b + c$
product rule	$\frac{d}{dx}(uv) = u \frac{dv}{dx} + v \frac{du}{dx}$
quotient rule	$\frac{d}{dx}\left(\frac{u}{v}\right) = \frac{v \frac{du}{dx} - u \frac{dv}{dx}}{v^2}$
chain rule	$\frac{dy}{dx} = \frac{dy}{du} \frac{du}{dx}$
Euler's method	If $\frac{dy}{dx} = f(x)$, $x_0 = a$ and $y_0 = b$, then $x_{n+1} = x_n + h$ and $y_{n+1} = y_n + hf(x_n)$
acceleration	$a = \frac{d^2x}{dt^2} = \frac{dv}{dt} = v \frac{dv}{dx} = \frac{d}{dx}\left(\frac{1}{2}v^2\right)$
arc length	$\int_{x_1}^{x_2} \sqrt{1+(f'(x))^2} dx$ or $\int_{t_1}^{t_2} \sqrt{(x'(t))^2 + (y'(t))^2} dt$

Vectors in two and three dimensions

$\underline{r} = x \underline{i} + y \underline{j} + z \underline{k}$
$ \underline{r} = \sqrt{x^2 + y^2 + z^2} = r$
$\dot{\underline{r}} = \frac{d\underline{r}}{dt} = \frac{dx}{dt} \underline{i} + \frac{dy}{dt} \underline{j} + \frac{dz}{dt} \underline{k}$
$\underline{r}_1 \cdot \underline{r}_2 = r_1 r_2 \cos(\theta) = x_1 x_2 + y_1 y_2 + z_1 z_2$

Mechanics

momentum	$\underline{p} = m \underline{v}$
equation of motion	$\underline{R} = m \underline{a}$

SPECIALIST MATHS

TRIAL EXAMINATION 2

MULTIPLE - CHOICE ANSWER SHEET

STUDENT NAME:.....

INSTRUCTIONS

Fill in the letter that corresponds to your choice. Example: ☐ A ☒ B ☐ C ☐ D ☐ E

The answer selected is B. Only one answer should be selected.

1. ☐ A ☐ B ☐ C ☐ D ☐ E
2. ☐ A ☐ B ☐ C ☐ D ☐ E
3. ☐ A ☐ B ☐ C ☐ D ☐ E
4. ☐ A ☐ B ☐ C ☐ D ☐ E
5. ☐ A ☐ B ☐ C ☐ D ☐ E
6. ☐ A ☐ B ☐ C ☐ D ☐ E
7. ☐ A ☐ B ☐ C ☐ D ☐ E
8. ☐ A ☐ B ☐ C ☐ D ☐ E
9. ☐ A ☐ B ☐ C ☐ D ☐ E
10. ☐ A ☐ B ☐ C ☐ D ☐ E

11. ☐ A ☐ B ☐ C ☐ D ☐ E
12. ☐ A ☐ B ☐ C ☐ D ☐ E
13. ☐ A ☐ B ☐ C ☐ D ☐ E
14. ☐ A ☐ B ☐ C ☐ D ☐ E
15. ☐ A ☐ B ☐ C ☐ D ☐ E
16. ☐ A ☐ B ☐ C ☐ D ☐ E
17. ☐ A ☐ B ☐ C ☐ D ☐ E
18. ☐ A ☐ B ☐ C ☐ D ☐ E
19. ☐ A ☐ B ☐ C ☐ D ☐ E
20. ☐ A ☐ B ☐ C ☐ D ☐ E