

VCE Chemistry $\frac{3}{4}$ Features of Electrolytic Cells [0.13] Workshop

Error Logbook:



New Ideas/Concepts	Didn't Read Question
<p>Pg / Q #: <u>Q18, Q15</u></p> <p>Notes:</p> <div style="display: flex; justify-content: space-between;"> <div style="width: 45%;"> <p>$\text{Fe(s)} \rightarrow \text{Fe}^{2+} + 2\text{e}^-$</p> <p>produces Fe^{2+}, which becomes strongest oxidant, $\therefore \text{Fe}^{2+} + 2\text{e}^- \rightarrow \text{Fe(s)}$</p> </div> <div style="width: 45%;"> <p>HF is not molten \downarrow covalent $\text{H}-\text{F}$</p> </div> </div>	<p>Pg / Q #: _____</p> <p>Notes:</p>
Algebraic/Arithmetic/ Calculator Input Mistake	Working Out Not Detailed Enough
<p>Pg / Q #: _____</p> <p>Notes:</p>	<p>Pg / Q #: _____</p> <p>Notes:</p> <p>if eq changes, what is now produced instead of <u>O_2</u></p>

Section A: Recap

Learning Objective: [2.2.1] - Find Electrolytic Reactions in Non-Standard Conditions (Molten & High Concentration)

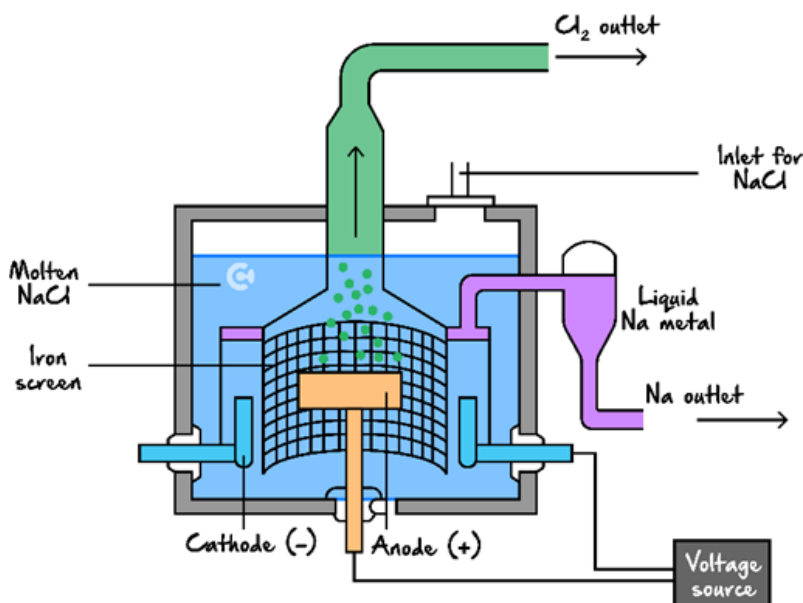


➤ High Concentration:

- Chloride ions at concentrations greater than 3.0M concentration become a [stronger] / [weaker] reductant and [react] / [do not] react in preference to water.
- Sodium ions are concentrations greater than 4.0 M concentration [react] / [do not] react in preference to water.

➤ Molten Concentration: water is not present, and the state of ions is (liquid).

Learning Objective: [2.2.2] - Identify Features of Electrolytic Cells & Their Purpose



- Molten electrolyte purpose: allow species weaker than H2O to react
- Iron at the cathode: unreactive
- Other electrolytes (e.g., CaCl_2) added: lower m.p.
- Barrier within the cell:
 - allow ions to pass through (complete circuit)
 - prevent products from directly contacting & spont. reacting

► Products constantly removed:

⚙️ prevent buildup → doesn't contact other products

⚙️ ↳ interference.

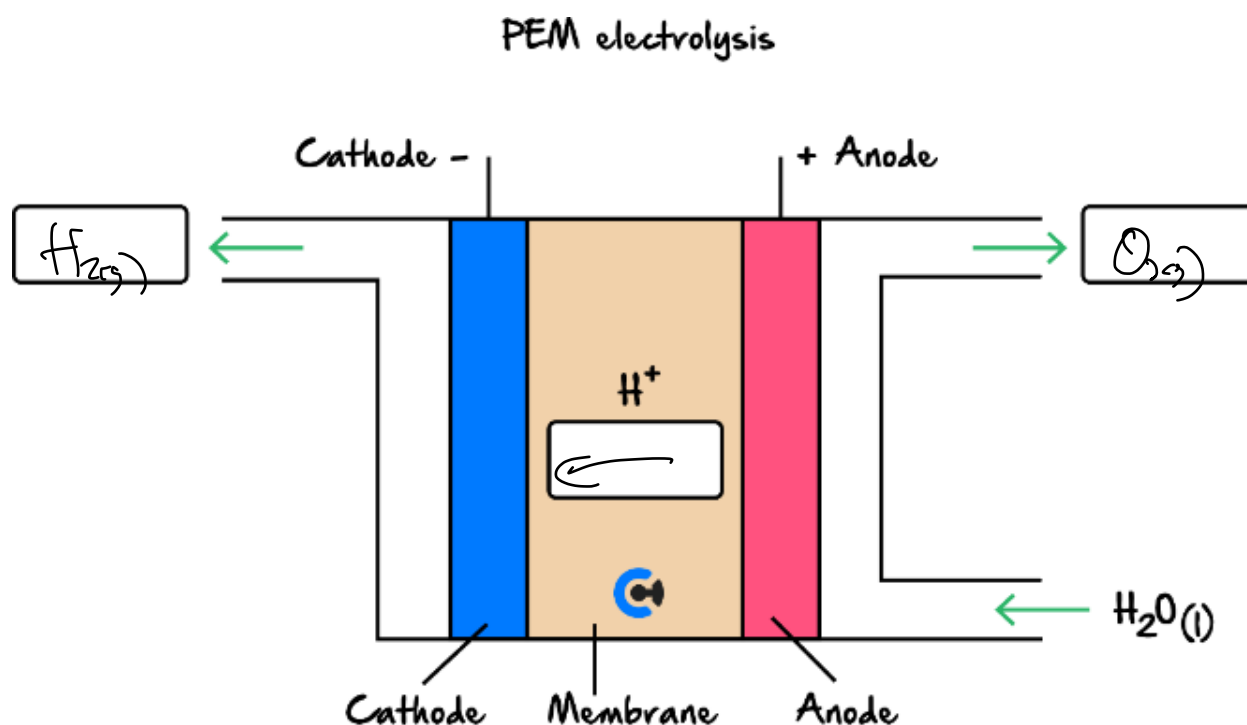
► Enclosed container: $O_{2(g)}$ doesn't react.

Learning Objective: [2.2.3] - Identify Key Features, Write Reactions & Relate to Sustainability & Green Chemistry Principles Regarding Production of Green Hydrogen (PEM & Artificial Photosynthesis)



► Both PEM electrolyser & artificial photosynthesis involve electrolysis of acidic water.

► PEM Electrolyser:

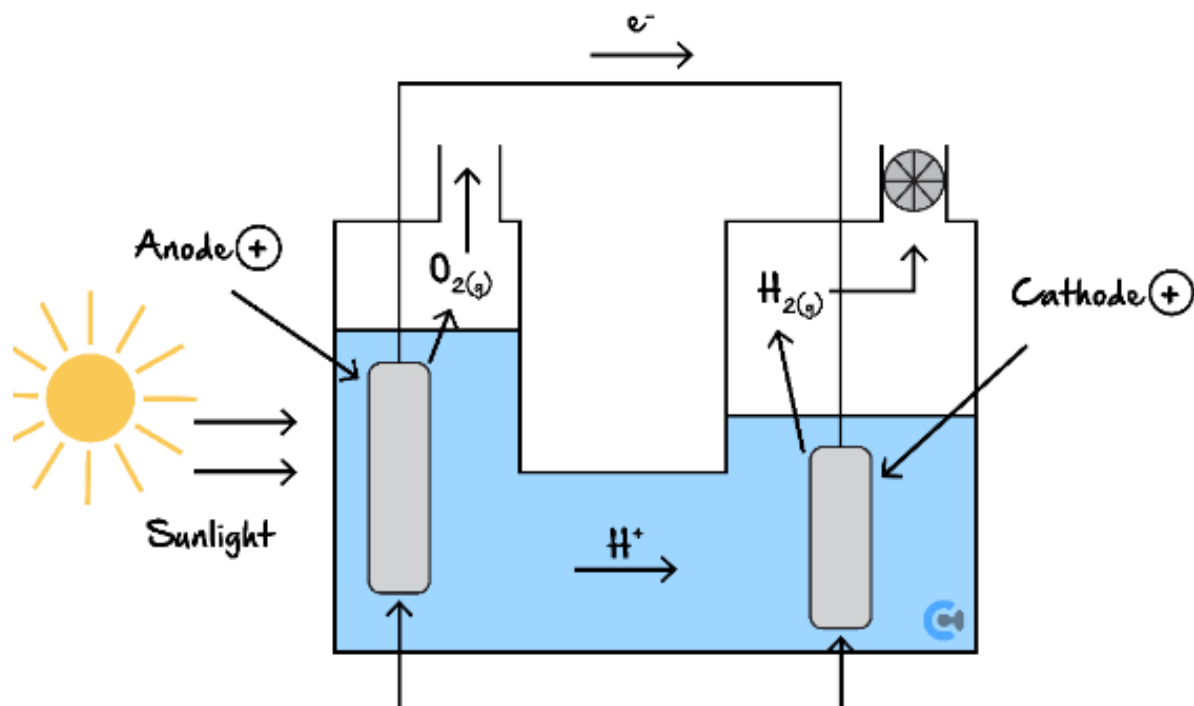


Cathode	Anode
$2H^+_{aq} + 2e^- \rightarrow H_{2(g)}$	$2H_2O_{(l)} \rightarrow O_{2(g)} + 4H^+_{aq} + 4e^-$

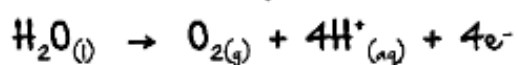
⚙️ Energy Used: wind/solar

⚙️ Green Chemistry Principle: catalysis

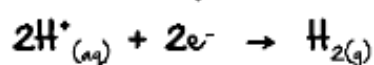
➤ Artificial Photosynthesis:



Half-equation:



Half-equation:



Energy Conversion: solar → chem

Green Chemistry Principle: catalysis, design for envy efficiency

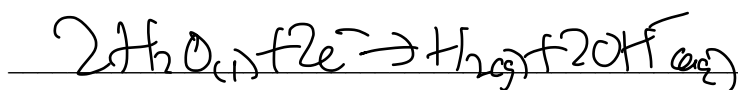
Space for Personal Notes

Question 1 Walkthrough.

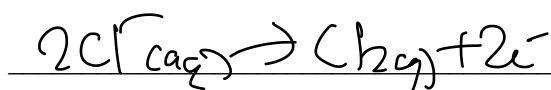
A solution of aluminium chloride is electrolysed at high concentrations and is compared to when molten aluminium chloride is electrolysed.

a. Write the half-equations that occur when it is electrolysed at higher concentrations at the:

i. Cathode.

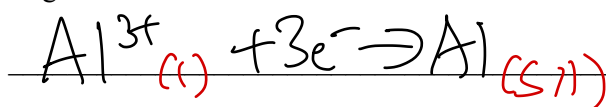


ii. Anode.




b. Write the half-equations that occur when it is electrolysed at molten at the:

i. Negative electrode. ^{ORC}



ii. Positive electrode.



Space for Personal Notes

Section B: Warm Up (17 Marks)

INSTRUCTION: 17 Marks. 11 Minutes Writing.



Question 2 (1 mark)

Which statement is true for both a galvanic cell and an electrolytic cell?

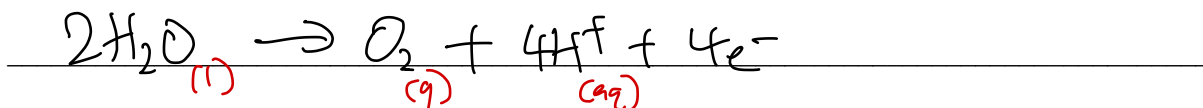
- ☒ A. Oxidation occurs at the negative electrode. AOO ✓ AOOX
- ☒ B. The anode is negatively charged.
- ☒ C. The strongest oxidant will react with the weakest reductant.
- ☒ D. Electrons flow from the anode to the cathode.

Question 3 (7 marks)

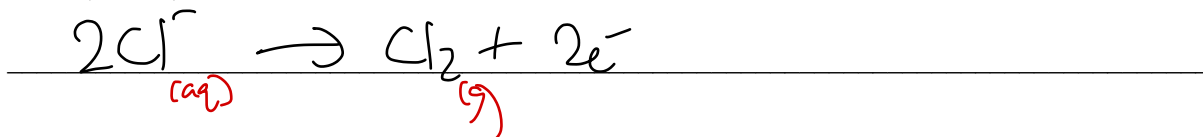
a.

⊕ AO

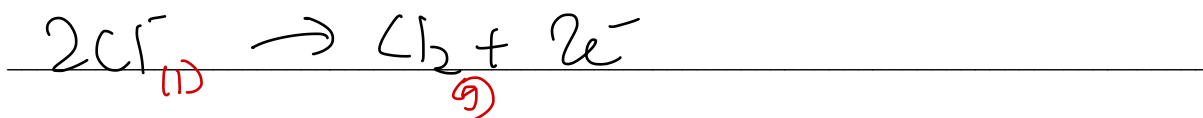
- i. Write the half-equation occurring at the positive electrode during the electrolysis of a 1.0 M solution of NaCl. (1 mark)



- ii. Write the half-equation occurring at the positive electrode during the electrolysis of a 10 M solution of NaCl. (1 mark)



- iii. Write the half-equation occurring at the positive electrode during the electrolysis of a molten mixture of NaCl. (1 mark)



- b. Suggest why a molten NaCl electrolyte is used in certain commercial cells if a concentrated solution of NaCl could be used as a cheaper alternative. Justify your reasoning. (2 marks)

Electrolysing concentrated NaCl vs molten NaCl will change
 → the reduction half-eg from: $2\text{H}_2\text{O} + 2\text{e}^- \rightarrow \text{H}_2 + 2\text{OH}^-$ (1) (2) (2)
 to: $\text{Na}^+ + \text{e}^- \rightarrow \text{Na}$ (1) (1)
 As such, molten NaCl may be used to produce sodium metal.

c.

- i. Explain what material commercial cells typically use as the anode. (1 mark)

graphite it is inert, & cheaper than other alternatives
 such as Pt(s).

- ii. Explain why a reactive metal such as iron is often used as the material for the cathode in commercial cells rather than inert ones like platinum or graphite. (1 mark)

Oxidation cannot occur at the cathode anyway, & thus
 iron can be used there as it is even cheaper.

Space for Personal Notes

Question 4 (3 marks)

- a. Outline why hydrogen gas leaks are challenging to detect without a gas detector. (1 mark)

Hydrogen gas is difficult to detect as it is colourless, odourless & tasteless.

- b. Explain the safety concerns associated with the leakage of hydrogen, and subsequently, outline what precautions can be taken to mitigate these risks. (2 marks)

$H_{2(g)}$ is highly flammable & can cause explosions.

To mitigate the risk, it should be kept away from ignition sources.

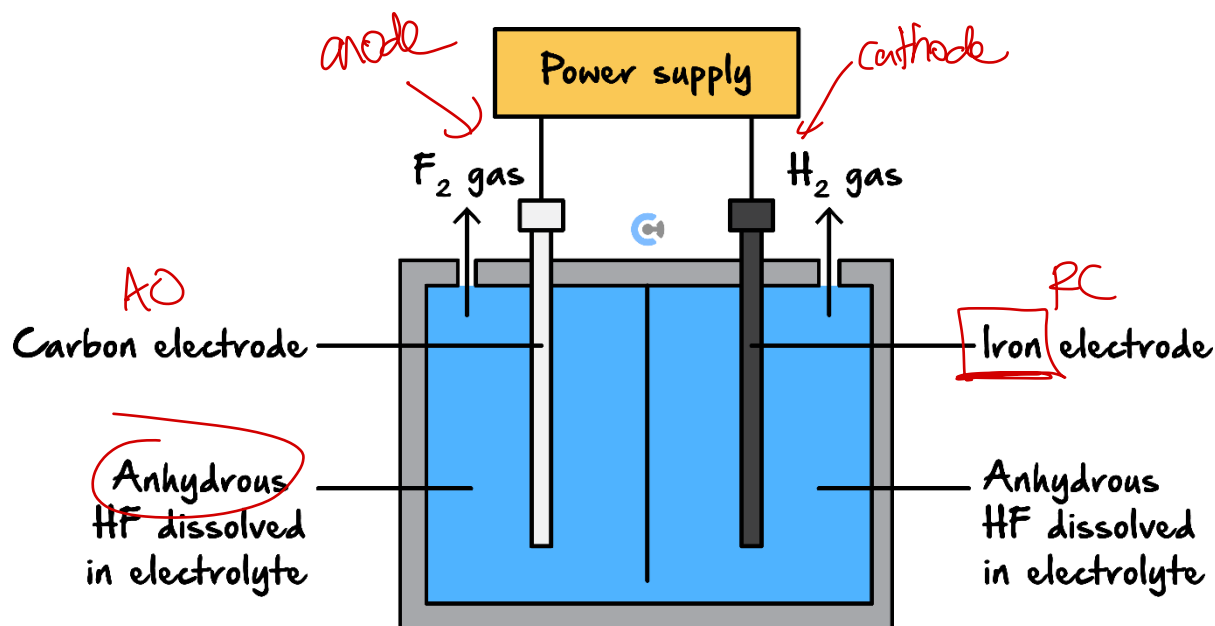
Space for Personal Notes

Question 5 (6 marks)

Many industrial processes result in the accumulation of deposits in reaction chambers. To clean these chambers a powerful oxidant, such as fluorine gas, F_2 , is required. A safe and cheap method of generating F_2 on-site uses anhydrous hydrogen fluoride, HF.

Anhydrous is when there is no water present, whereby a solvent other than water is used instead.

An electrolytic cell used for the on-site production of F_2 is shown below.

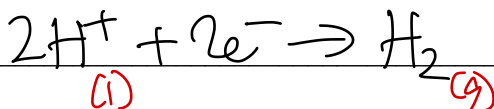


- a. Indicate which of the electrodes is the cathode. (1 mark)


iron electrode

- b. Write the half equations for the reactions expected at the:

- i. Iron electrode. (1 mark)




- ii. Carbon electrode. (1 mark)



- c. Anhydrous hydrogen fluoride is used rather than an aqueous solution of HF. Suggest a reason for this and include a relevant chemical equation to assist in your response. (2 marks)

Using aqueous solution would still produce $H_2(g)$, but the anode reaction would change as H_2O becomes the new strongest reductant & reacts in preference to the F^-



As such, only anhydrous $HF(l)$ is used to produce $F_2(g)$.

- d. The cell is fully enclosed, with only passageways for the products to come out of the cell. State one reason for this. (1 mark)

To prevent oxygen from entering the cell & spontaneously reacting w/ products such as $H_2(g)$ spontaneously.

Space for Personal Notes

Section C: Ramping it Up (13 Marks)

INSTRUCTION: 13 Marks. 10 Minutes Writing.



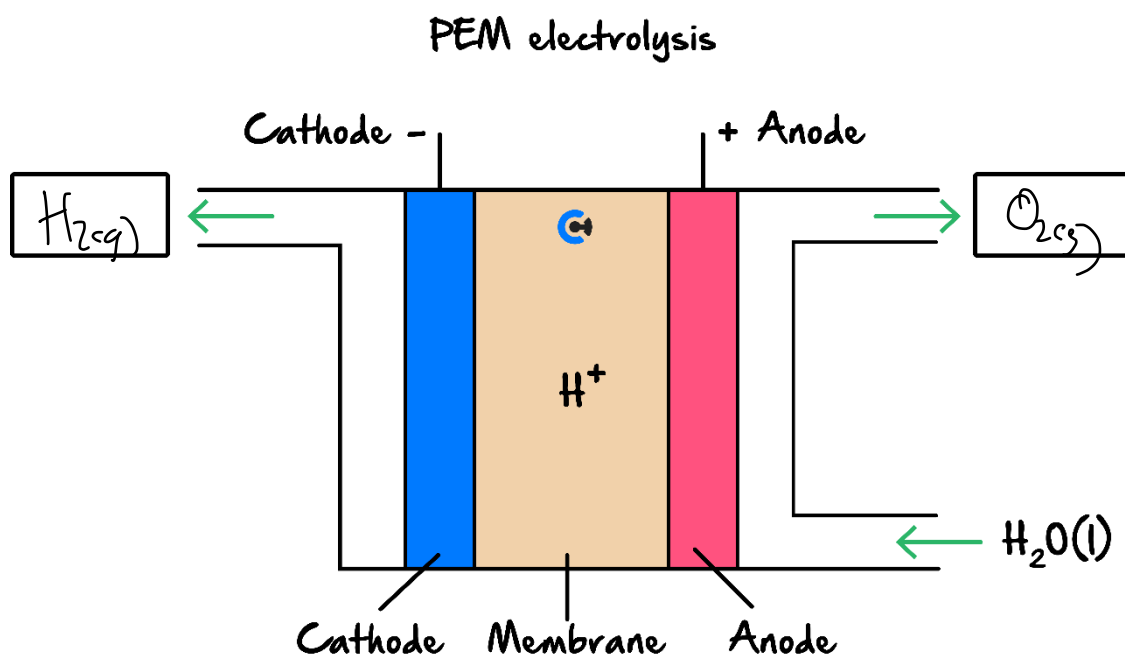
Question 6 (8 marks)

Society has recently been pushing for 'green' chemistry. One such example of this principle is the 'green' production of hydrogen gas.

- a. Outline why the 'regular' electrolysis of water use is not considered to be green. (1 mark)

'regular' electrolysis of water may not source electrical energy from renewable sources of energy and thus is not renewable.

- b. The polymer electrolyte membrane (PEM) electrolyser is a commercial cell that will be used in society very soon. A diagram of it is shown below:



- i. Explain **one** feature of this electrolyser that makes it more environment-friendly than the electrolysis of an acidic solution and refer to **one** United Nations Sustainability Development Goals. Use Item 26.i of the Data Book. (2 marks)

This PEM electrolyser sources electrical energy from either photovoltaic cells (solar) or wind energy which are renewable sources of energy. This relates to the United Nations Sustainability Development Goal 13 - climate change, as it is renewable, and does not release greenhouse gases during the production of electrical energy this way.

- ii. State **one** disadvantage of this electrolyser, and refer to **one** United Nations Sustainability Development Goals. Use Item 26.i of the Data Book. Justify your answer. (2 marks)

PEM electrolyser is expensive as the electrodes are porous, inert, catalytic & conduct electricity. This relates to United Nations Sustainability Development Goal 7: affordable and clean energy, as the cell produces clean energy but is not affordable.

only some metals such as

Au(s), Pt(s), Ir(s)

- iii. Write the products formed at the cathode and anode by filling in the boxes provided on the diagram above. (1 mark)

c.

- i. Indium, a porous material, is often used in this cell as the material for the electrodes. Explain how this feature aids the functioning of the cell. (1 mark)

It is porous to increase surface area, increasing cell efficiency.

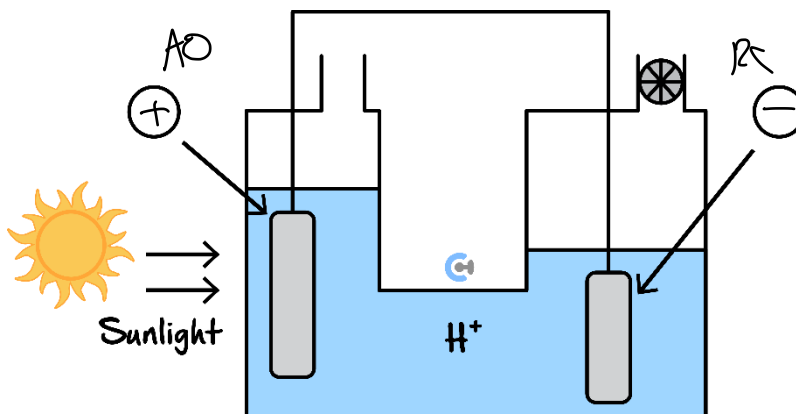
- ii. Indium also poses a second benefit in that it increases the rate of the reactions occurring. State **one** green chemistry principle this quality relates to. (1 mark)

Catalysis

Space for Personal Notes

Question 7 (5 marks)

Another green method for the production of hydrogen gas is via the principle of artificial photosynthesis. The cell which allows for this process to occur is depicted below.



- a. Given that the sunlight causes the oxidation of water, label the polarities of the electrodes by placing a + or - sign in the circles above. (1 mark)

- b. i. Compare the energy conversions in this cell compared to that in the polymer electrolyte membrane (PEM) electrolyser. (1 mark)

Artificial Photosynthesis	PEM electrolyser
solar \rightarrow chemical	solar \rightarrow elec \rightarrow chem

- ii. Explain whether this artificial photosynthesis cell or the PEM electrolyser is more energy efficient. Refer to **one** green chemistry principle. (Use **Item (26) (ii)** of the Data Book) (2 marks)

Artificial photosynthesis as artificial photosynthesis only has one energy conversion, it is more energy efficient overall, and thus relates to the green chemistry principle of "design for energy efficiency"

- c. State the alternative name for the artificial photosynthesis cell. (1 mark)

water oxidation and proton reduction catalyst system

Section D: Getting Trickier I (8 Marks)

INSTRUCTION: 8 Marks. 6 Minutes Writing.

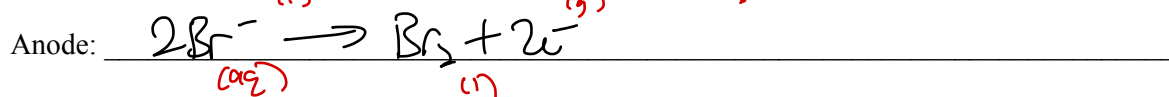
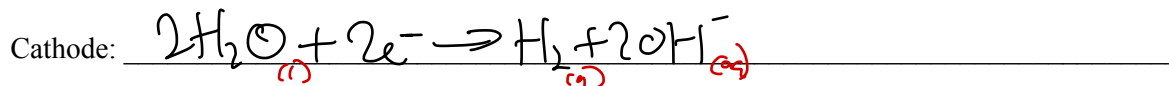


Question 8 (8 marks)

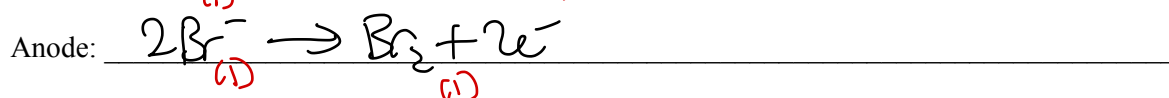
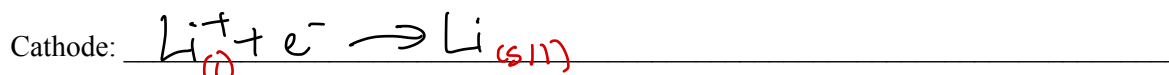
The electrolysis of 1 M LiBr (aq), and molten LiBr, i.e. LiBr (l) were investigated using carbon electrodes and a potential difference of 5 volts.

a. Write balanced half-equations for the reactions expected during:

i. The electrolysis of 1 M LiBr (aq). (2 mark)



ii. The electrolysis of molten LiBr (l). (2 marks)



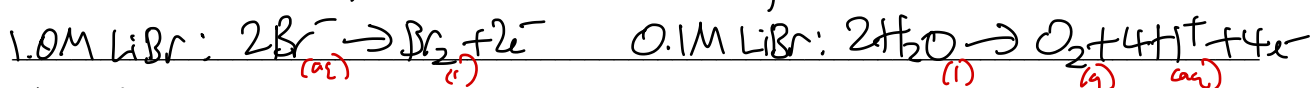
iii. Explain how pH changes at one of the electrodes during the electrolysis of 1 M LiBr. (1 mark)

pH increases as OH^-_{aq} is produced, making the solution more basic overall.

- b. When 0.1 M LiBr (aq) was electrolysed instead of 1 M LiBr (aq), it was observed that the products produced were different.

Write half equations for the reactions at each half cell and thus describe which products are observed to be produced, giving justification for your reasoning. (2 marks)

The cathode reaction is the same for both cells: $2\text{H}_2\text{O}_{(l)} + 2\text{e}^- \rightarrow \text{H}_{2(g)} + 2\text{OH}^-_{(aq)}$
 However, due to lower concentration of $\text{Br}^-_{(aq)}$, it becomes a
weaker reductant, & thus water reacts in preference



Thus for 1.0 M LiBr: $\text{H}_{2(g)}$, $\text{Br}_{2(l)}$, $\text{OH}^-_{(aq)}$ are produced.

for 0.1 M LiBr: $\text{H}_{2(g)}$, $\text{O}_{2(g)}$ are produced -

- c. The production of the products for the electrolysis of 0.1 M LiBr (aq) comes with a safety risk. List one safety precaution which should be undertaken to minimise this risk. (1 mark)

electrolysis of 0.1 M LiBr produces $\text{H}_{2(g)}$ which is flammable & explosive. It should be kept away from ignition sources.

Space for Personal Notes

Section E: Getting Trickier II (9 Marks)

INSTRUCTION: 9 Marks. 8 Minutes Writing.



Question 9 (1 mark)

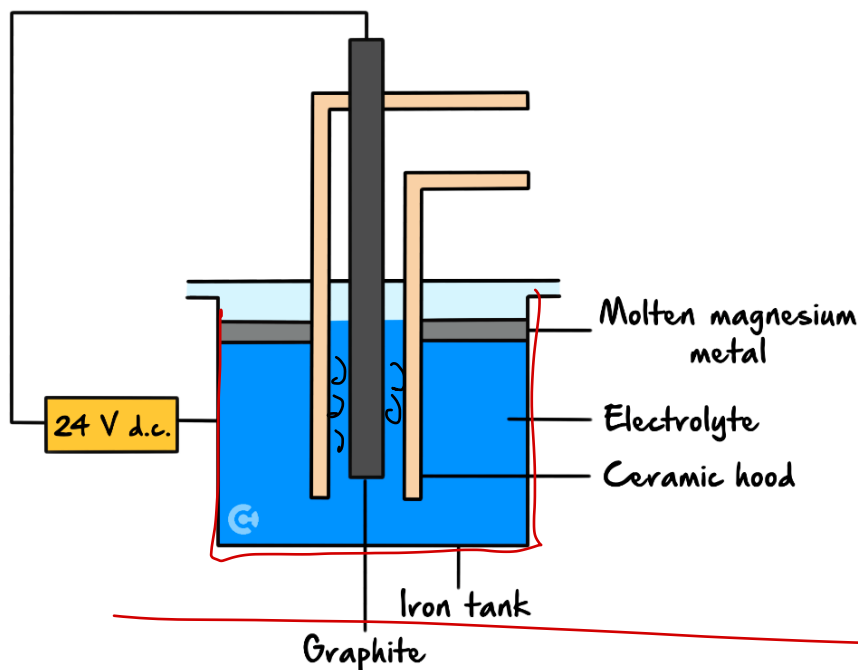
Pure NaCl is not used in a Down's cell. The liquid that is in a Down's cell is a mixture of CaCl_2 and NaCl. The CaCl_2 /NaCl mixture is used instead of pure NaCl because it:

- A. Has a higher melting temperature.
- B. Improves the yield of chlorine produced.
- C. Improves the purity of the sodium produced.
- D. Enables the process to be carried out at a lower temperature.**

Space for Personal Notes

Question 10 (8 marks)

Magnesium is produced by the electrolysis of molten magnesium chloride. The diagram below shows the main features of the electrolytic cell, which is used.



a.

- i. Write the half-equation for the process which occurs at the graphite electrode. (1 mark)



- ii. Tick one box in the table below to show the identity and polarity of the graphite electrode in the electrolytic cell shown above. (1 mark)

	Positive	Negative
Anode	✓	
Cathode		

- iii. Explain the likely role of the ceramic hood. (1 mark)

Separates the products to ensure they do not contact & spontaneously react w/ one another.

- b. It can be predicted from the electrochemical series that the magnesium ions in the electrolyte will not react with the iron tank.

- i. What is the basis of this prediction? (1 mark)

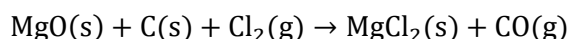
An oxidant (A) will only react spontaneously with a reductant (B) if the conjugate of A is a weaker reductant than B. The conjugate of Mg^{2+} is the reductant Mg. Mg is a stronger reductant than Fe.

- ii. This prediction could be unreliable. Explain why. (2 marks)

The electrochemical series is formulated using standard conditions of 1 M concentration of solutions, gas pressure of 1 atm and temperature of 25°C.

The conditions in this cell vary significantly from these conditions and thus any predictions may be unreliable.

- c. To obtain the magnesium chloride electrolyte, the following reaction is used:



Suggest one reason why molten magnesium oxide is not used directly in the electrolytic cell to produce magnesium. (2 marks)

Using molten electrolytes is costly because of the energy required to melt the solid and keep it molten.

The melting point of magnesium chloride is likely to be much lower than the melting point of magnesium oxide. Less energy is required to produce a molten electrolyte, and so costs are reduced.

*Let's take a **BREAK!***



Space for Personal Notes

Section F: VCAA-Level Questions I (9 Marks)

INSTRUCTION: 9 Marks. 30 Seconds Reading. 8 Minutes Writing.



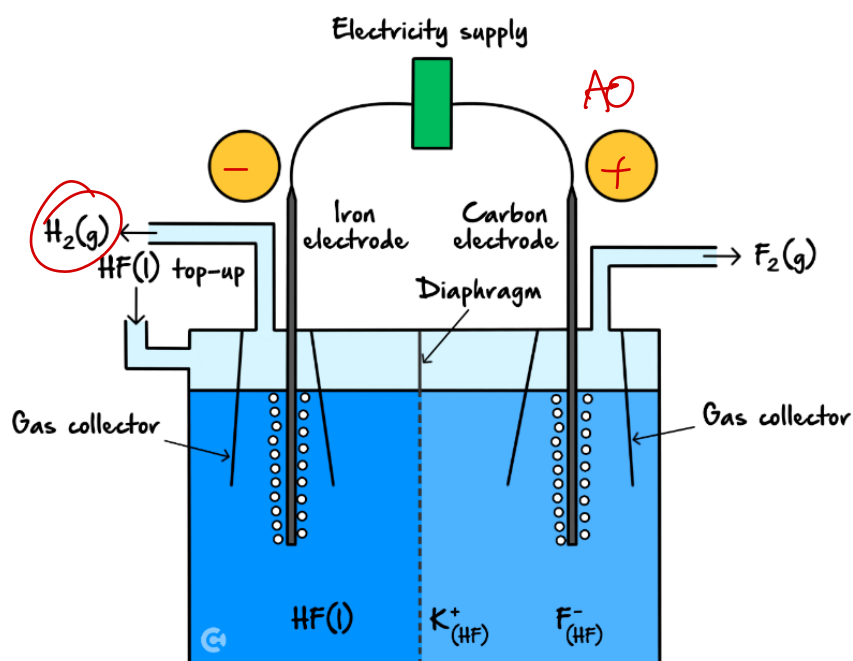
Question 11 (9 marks)



Inspired from VCAA Chemistry Exam 2017

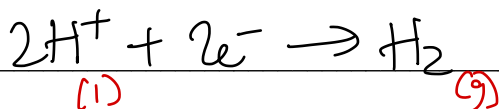
<https://www.vcaa.vic.edu.au/Documents/exams/chemistry/2017/2017chem-w.pdf#page=30>

Given that fluorine gas, F_2 , is the most reactive of all metals, it is extremely beneficial to have access to it. In order to form fluorine gas, we electrolyse liquid hydrogen fluoride, HF, to form fluorine and hydrogen gases.





a. Write the equation for:

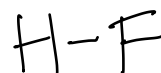
i. The half-reaction occurring at the cathode. (1 mark)



ii. The overall reaction. (1 mark)



b. Label the polarities for each electrode in the circles provided above. (1 mark)



c. Suggest why the diaphragm as shown in the diagram above is important for the safe operation of the cell. (2 marks)

The products are $H_2(g)$ & $F_2(g)$. The diaphragm prevents them from contacting each other directly & spontaneously reacting, which could otherwise lead to an explosion. (1)

The diaphragm also allows ions to pass through, & complete the circuit. (1)

d. Explain why the carbon electrode cannot be replaced with an iron electrode. (2 marks)

If the carbon electrode (anode) were to be made of $Fe(s)$, $Fe(s)$ would become the new strongest reductant & react in preference to $F_2(g)$ according to the following half-equation: $Fe(s) \rightarrow Fe^{2+} + 2e^-$ (2a)
This would mean that Fe^{2+} is produced instead of $F_2(g)$. (2b)

e. Explain why the left electrode as shown in the diagram above can be made of iron. (2 marks)

The left electrode can be made of iron as it is the cathode, where only reduction can take place (not oxidation). As such, while $Fe(s)$ is a stronger reductant, it is present at the cathode & cannot oxidise, thus it does not interfere w/ the reaction. (1)

Space for Personal Notes

Section G: Multiple Choice Questions (6 Marks)

INSTRUCTION: 6 Marks. 6 Minutes Writing.

Question 12 (1 mark)

If we compare a galvanic cell with an electrolytic cell, it is true to state that:

- ☒ A. In a galvanic cell reduction occurs at the negative electrode.
- ☐ B. In both cells the anode is positive and the cathode is negative.
- ☐ C. In an electrolytic cell oxidation occurs at the cathode.
- ☒ D. In both cells reduction occurs at the cathode.

Question 13 (1 mark)

To produce magnesium metal and chlorine gas from magnesium chloride, a molten electrolyte needs to be used. This is because:

- ☐ A. Water is a stronger reductant than chloride ions.
- ☒ B. Water is a stronger oxidant than magnesium ions.
- ☐ C. Less energy is used when electrolysing a molten electrolyte as water does not react.
- ☐ D. The products produced from an aqueous solution can react together spontaneously.

Question 14 (1 mark)

Calcium metal can be obtained from the electrolysis of molten calcium chloride. During this process, calcium ions flow to the:

- ☐ A. Anode and are reduced to calcium metal.
- ☐ B. Anode and are oxidised to calcium metal.
- ☒ C. Cathode and are reduced to calcium metal.
- ☐ D. Cathode and are oxidised to calcium metal.


Question 15 (1 mark)

Inspired from VCAA Chemistry NHT Exam 2022

<https://www.vcaa.vic.edu.au/Documents/exams/chemistry/2022/NHT/2022ChemistryNHT-w.pdf#page=14>

Fluorine can be produced commercially by the electrolysis of a mixture of potassium hydrogen difluoride, KHF_2 , and hydrogen fluoride, HF. HF is a molecular gas at standard laboratory conditions (SLC).

Which of the following about the electrolysis of HF to produce fluorine is correct?

	Molten HF is not used in electrolysis to produce fluorine because	Aqueous HF is not used in electrolysis to produce fluorine because
A.	HF is a molecule.	<u>Oxygen</u> would be produced.
B.	HF is a molecule.	Hydrogen would be produced.
C.	The melting temperature of HF is too high.	Oxygen would be produced.
D.	The melting temperature of HF is too high.	Hydrogen would be produced.

Question 16 (1 mark)

Na^+ - spectator

Brine is a concentrated solution of sodium chloride. The electrolysis of brine is a common industry due to the useful products it yields. The products are:

- A.** Hydrogen gas, chlorine gas and sodium hydroxide.
- B.** Hydrogen gas and oxygen gas.
- C.** Sodium metal and oxygen gas.
- D.** Sodium metal and chlorine gas.

Space for Personal Notes

Question 17 (1 mark)

When comparing the electrolysis of molten CuI_2 with that of a 1.0 M aqueous solution of CuI_2 , which one of the following statements is correct?

- ☒ A. The products at the anode and the cathode are the same in both cases.
- ☐ B. The product at the cathode is the same in both cells but the products at the anode are different.
- ☐ C. The product at the anode is the same in both cells but the products at the cathode are different.
- ☐ D. The products at the cathodes of both cells are different from the products at the anodes.

Space for Personal Notes

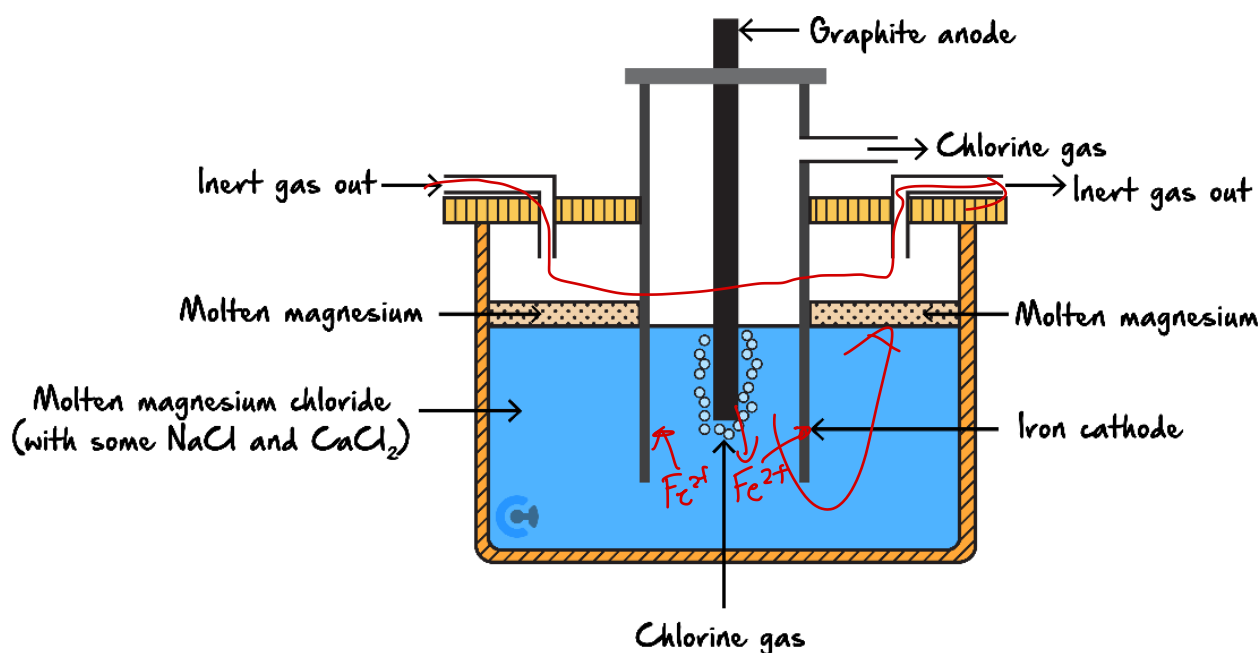
Section H: VCAA-Level Questions II (8 Marks)

INSTRUCTION: 8 Marks. 30 Seconds Reading. 7 Minutes Writing.

Question 18 (8 marks)

2015 VCAA

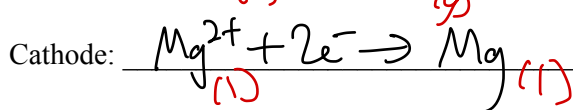
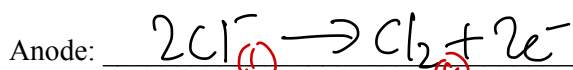
Magnesium is one of the most abundant elements on Earth. It is used extensively in the production of magnesium-aluminium alloys. It is produced by the electrolysis of molten magnesium chloride. A schematic diagram of the electrolytic cell is shown below.



The design of this cell takes into account the following properties of both magnesium metal and magnesium chloride:

- Molten magnesium reacts vigorously with oxygen.
- At the temperature of molten magnesium chloride, magnesium is a liquid. ✓
- Molten magnesium has a lower density than molten magnesium chloride and forms a separate layer on the surface.

a. Write a balanced half-equation for the reaction occurring at each of: (2 marks)



- b. Explain why an inert gas is constantly blown through the cathode compartment. (1 mark)

to reduce chance of Mg to come in contact w/ O_2 & spontaneously react & to flush out any O_2 .

- c. The melting point of a compound can often be lowered by the addition of small amounts of other compounds. In an industrial process, this will save energy. In this cell, NaCl and $CaCl_2$ are used to lower the melting point of $MgCl_2$. Why can NaCl and $CaCl_2$ be used to lower the melting point of $MgCl_2$ but $ZnCl_2$ cannot be used? (2 marks)

① Na^+ & Ca^{2+} are both weaker oxidants than Mg^{2+} & thus will not reduce in preference to Mg^{2+} .
 ② However, Zn^{2+} is a stronger oxidant than Mg^{2+} , & thus would react in preference to Mg^{2+} and cause Zn to be formed rather than Mg.

- d. What difference would it make to the half-cell reactions if the graphite anode were replaced with an iron anode? Write the half-equation for any different half-cell reaction. Justify your answer. (3 marks)

① Iron would become the new strongest reductant & react in preference to Cl^- .

② Anode new half-equation: $Fe \rightarrow Fe^{2+} + 2e^-$

③ The Fe^{2+} cations would then migrate to the cathode, becoming new strongest oxidant.
 Cathode new half-eg: $Fe^{2+} + 2e^- \rightarrow Fe$

Space for Personal Notes

Section I: Extension Questions (19 Marks)

Question 19 (11 marks)

It has been suggested that aluminium could be used as a fuel source by reacting it with water to produce hydrogen gas. The aluminium rods could be replaced when the vehicle is “refuelled”. The hydrogen gas produced could then be used in a fuel cell.

- a. What is the advantage of producing hydrogen gas in this way? (1 mark)

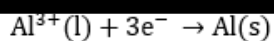
No CO₂ emissions are directly produced from this method of producing hydrogen.

- b. The aluminium could be prepared using electrolysis.

- i. Should the electrolyte be a molten liquid or an aqueous solution? Why? (2 marks)

The electrolyte should be a molten solution as water is a strong oxidant than aluminium ions, thus preventing the formation of aluminium metal from the electrolysis of an aqueous solution.

- ii. Write the half equation for the reaction occurring at the cathode. (1 mark)



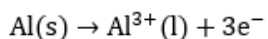
- iii. Assuming aluminium chloride is being electrolysed to create aluminium, calculate the voltage required to prevent the products from re-reacting and hence, justify why this is the minimum potential to be provided in the electrolysis cell. (2 marks)

$$E_{\text{MF}} = -1.66 - 1.36 = -3.02 \text{ V}$$

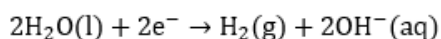
Hence, > 3.02V of voltage is required to force non-spontaneous redox reaction.

- c. When the aluminium is reacted to form hydrogen from water, write half equations for the oxidation and reduction process.

- i. Oxidation. (1 mark)

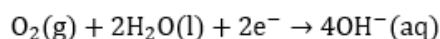


- ii. Reduction. (1 mark)



- d. The fuel cell uses a potassium hydroxide electrolyte.

- i. Write the half equation for the reaction occurring at the positive electrode. (1 mark)



- ii. Ions move through the electrolyte. In what direction would the hydroxide ions move and why do they move in this direction? (2 marks)

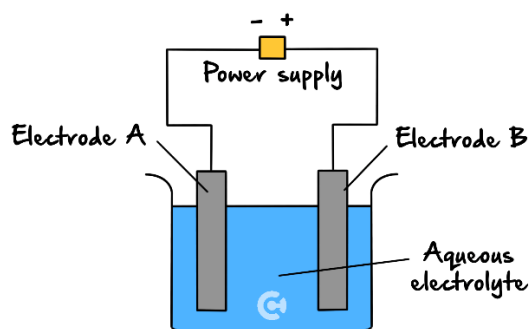
The hydroxide ions in the electrolyte move towards the anode as to balance the positive charge created there by the loss of electrons and to provide the hydroxide ions necessary for the reaction.

Space for Personal Notes

Question 20 (8 marks)

Three experiments were conducted to investigate electrolytic cell reactions.

- a. In the experiment 1, the apparatus shown below was used.



After the current had passed through the cell for some time, a reddish brown liquid was formed at the electrode B, while a metal was found deposited on the electrode A.

- i. Suggest the probable formula of the reddish-brown liquid. (1 mark)

Br₂

- ii. Explain why the deposited metal could not be magnesium. (2 marks)

H₂O is a stronger oxidant than Mg²⁺.

In aqueous solution, water will be reduced to form hydrogen gas and hydroxide ions in preference to the reduction of magnesium ions to deposit magnesium.

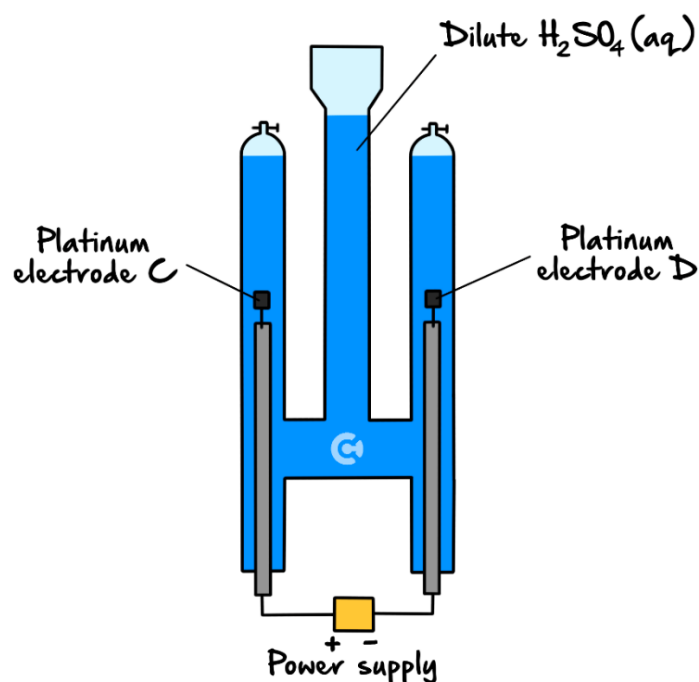
- iii. Suggest a possible electrolyte for this cell which is consistent with the observations made. (1 mark)

For example,
CrBr₂ (aq)

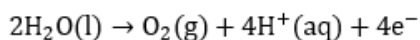
- iv. Explain why, regardless of the choice of electrolyte (assuming no spontaneous reaction occurs), identify which of the electrodes can be iron and explain why this is so. (2 marks)

~~Electrode A is able to be iron as it is the cathode where reduction occurs.~~
Solid iron cannot be further reduced, thus making it inert in the cell itself
~~and thus the choice of electrolyte and their oxidation and reduction~~
strengths will not impact whether iron reacts in the cell or not. Stronger.

- b. In experiment 2, the apparatus shown below was used with a dilute sulphuric acid solution as the electrolyte. A steady current of 0.060 amperes was maintained during the experiment.



- i. Write a half-equation for the gas-producing reaction expected at the electrode C. (1 mark)



- ii. The cell is planned to be used to create reactants for an acidic fuel cell. Identify the component of the cell that allows this to occur. (1 mark)

The apparatus keeps the products,

$\text{H}_2(\text{g})$ and $\text{O}_2(\text{g})$ separate,

preventing a reaction and allowing them to be used properly in a fuel cell rather than them spontaneously reacting.

Space for Personal Notes



Website: contoureducation.com.au | Phone: 1800 888 300 | Email: hello@contoureducation.com.au

VCE Chemistry $\frac{3}{4}$

Free 1-on-1 Support



Be Sure to Make the Most of These (Free) Services!

- Experienced Contour tutors (45 + raw scores, 99 + ATARs).
- For fully enrolled Contour students with up-to-date fees.
- After school weekdays and all-day weekends.

<u>1-on-1 Video Consults</u>	<u>Text-Based Support</u>
<ul style="list-style-type: none">➤ Book via bit.ly/contour-chemistry-consult-2025 (or QR code below).➤ One active booking at a time (must attend before booking the next).	<ul style="list-style-type: none">➤ Message +61 440 137 304 with questions.➤ Save the contact as "Contour Chemistry".

Booking Link for Consults

bit.ly/contour-chemistry-consult-2025



Number for Text-Based Support

[+61 440 137 304](tel:+61440137304)