



Website: contoureducation.com.au | Phone: 1800 888 300
Email: hello@contoureducation.com.au

VCE Chemistry ½
Stoichiometry [2.3]
Homework

Admin Info & Homework Outline:

Student Name	
Questions You Need Help For	
Compulsory Questions	Pg 2 – Pg 13
Supplementary Questions	Pg 14 – Pg 27



Section A: Compulsory Questions (54 Marks)

Sub-Section [2.3.1]: Write Balanced Chemical Equations, Including Combustion



Question 1 (1 mark)



Balance the equation where H_2 gas reacts with oxygen gas to form water.

Question 2 (4 marks)



Balance the following equations:

a. $\text{Fe} + \text{O}_2 \rightarrow \text{Fe}_2\text{O}_3$. (1 mark)

b. $\text{CaCO}_3 \rightarrow \text{CaO} + \text{O}_2$. (1 mark)

c. $\text{AgNO}_3 + \text{Na}_2\text{SO}_4 \rightarrow \text{Ag}_2\text{SO}_4 + \text{NaNO}_3$. (1 mark)

d. $\text{Pb}(\text{NO}_3)_2 + \text{KI} \rightarrow \text{PbI}_2 + \text{KNO}_3$. (1 mark)

Space for Personal Notes

Question 3 (4 marks)


Balance the following combustion equations:

- a. Propane's complete combustion. (2 marks)

- b. Octane's complete combustion. (2 marks)

Space for Personal Notes

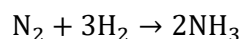


Sub-Section [2.3.2]: Apply Stoichiometry to Find the Amount of Another Substance Used/Produced

Question 4 (2 marks)



Given the equation:

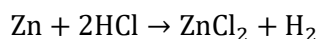


If 4.00 moles of hydrogen gas react, how many moles of ammonia would be produced?

Question 5 (4 marks)



Given the following equation:



- a. If 15.0 g of Zn reacts with excess hydrochloric acid, how many grams of hydrogen gas would be produced? (2 marks)

- b. If 2.00 g of H₂ gas was produced, then how much zinc was reacted in the first place, in grams? (2 marks)

Question 6 (4 marks)


Given the combustion of 10.56 g of propane, C_3H_8 , calculate the total mass of gases released, assuming the reaction occurred at 120°C.

Space for Personal Notes

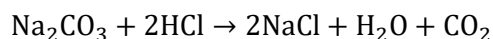


Sub-Section [2.3.3]: Identify the Limiting Reagent When Reactants' Amounts are Known

Question 7 (2 marks)



Consider the reaction:

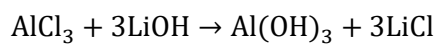


There are 10.00 g of Na_2CO_3 and 6.00 g of HCl. Determine what the limiting and excess reagents are.

Space for Personal Notes


Question 8 (4 marks)

Consider the following reaction:



There are 2.50 *mol* of AlCl_3 , and 5.50 *mol* of LiOH .

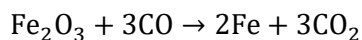
- a.** What are the limiting and excess reagents? (2 marks)

- b.** Find the mass of LiCl and Al(OH)_3 formed. (2 marks)

Space for Personal Notes


Question 9 (6 marks)

Consider the following reaction:



There are 12.00 g of Fe_2O_3 and 6.00 g of CO.

- a.** What are the limiting and excess reagents? (2 marks)

- b.** Find the mass of Fe and CO_2 formed. (2 marks)

- c.** In another experiment, if 12.58 g of CO_2 was formed then how much Fe_2O_3 was reacted initially in grams? (2 marks)

Space for Personal Notes

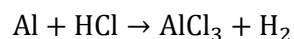


Sub-Section [2.3.4]: Apply Limiting Reagent to Calculate the Mass of Product(s) Formed, & the Amount of Excess Reagent Leftover

Question 10 (3 marks)



Given the following reaction:



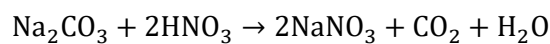
- a. Balance the equation. (1 mark)

- b. A sample of 4.00 moles of Al and 10.00 moles of HCl reacts. What is the amount of HCl left? (2 marks)

Space for Personal Notes


Question 11 (4 marks)

Consider the reaction:



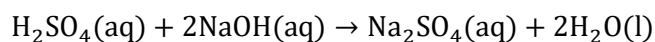
- a. Which is the excess and limiting reagent, given that there are 45 grams of Na_2CO_3 and 30 grams of HNO_3 ? (2 marks)

- b. What is the amount of excess reagent left over in grams? (2 marks)

Space for Personal Notes


Question 12 (6 marks)

Given the following reaction:



- a.** If there are 3.20 g of sulphuric acid, H_2SO_4 , and 3.28 g of NaOH, find the limiting reagent. (3 marks)

- b.** What mass of the excess reagent will be left over? (2 marks)

- c.** What is the percentage of the excess reagent that was used in this reaction? (1 mark)

Space for Personal Notes

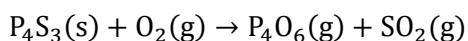


Sub-Section: The 'Final Boss'

Question 13 (10 marks)



Given the following reaction:



- a. Balance the above reaction. (1 mark)

- b. If 3.00 g of P_4S_3 is reacted, then how much SO_2 gas would be produced? (2 marks)

- c. If there is 10.37 g of P_4S_3 and 9.62 g of oxygen gas, which is the limiting and excess reagent? (3 marks)

- d. Find the mass of P_4O_6 produced. (2 marks)

e. How much of the excess reagent, in *mol*, is left at the end of the reaction? (2 marks)

Space for Personal Notes

Section B: Supplementary Questions (81 Marks)

Sub-Section [2.3.1]: Write Balanced Chemical Equations, Including Combustion



Question 14 (1 mark)



Balance the equation where CH_4 reacts with oxygen gas to form carbon dioxide and water.

Question 15 (4 marks)



Balance the following equations:

a. $\text{KClO}_3 \rightarrow \text{KCl} + \text{O}_2$. (1 mark)

b. $\text{CH}_3\text{OH} + \text{O}_2 \rightarrow \text{H}_2\text{O} + \text{CO}_2$. (1 mark)

c. $\text{Ca}(\text{OH})_2 + \text{HCl} \rightarrow \text{CaCl}_2 + \text{H}_2\text{O}$. (1 mark)

d. $\text{AgCl} + \text{Mg}(\text{NO}_3)_2 \rightarrow \text{MgCl}_2 + \text{AgNO}_3$. (1 mark)

Space for Personal Notes

Question 16 (4 marks)


Balance the following combustion equations:

- a. Ethanol's complete combustion. (2 marks)

- b. Decane's complete combustion. (2 marks)

Question 17 (7 marks)


Consider the combustion equation of butanol.

- a. Write the balanced equation, assuming that CO_2 and H_2O is produced. (2 marks)

- b. Now, consider when CO and H_2O is produced. (1 mark)

- c. Why is it suggested that we balance carbon last in a chemical equation generally? (2 marks)

- d. A student argues that we can have more matter at the end of a reaction as we are inputting energy into the reaction system as a combustion reaction usually results in our fuel disappearing over time. Evaluate this statement. (2 marks)

Space for Personal Notes

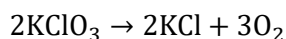


Sub-Section [2.3.2]: Apply Stoichiometry to Find the Amount of Another Substance Used/Produced

Question 18 (2 marks)



Given the equation:

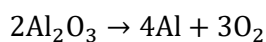


If 5.50 moles of KClO_3 reacts, then how much oxygen gas would be produced, in moles?

Question 19 (4 marks)



Given the following equation:



a. If 7.00 g of Al_2O_3 decomposes, how many grams of O_2 gas would be produced? (2 marks)

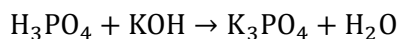
b. If 3.00 g of oxygen gas was produced, how much Al_2O_3 would've been needed, in grams? (2 marks)

Question 20 (4 marks)


Given the combustion of 8.49 g of propanol, $\text{C}_3\text{H}_7\text{OH}$, calculate the total mass of gases released, assuming the reaction occurred at 120°C .

Question 21 (9 marks)


Consider the following chemical equation:



- a. Balance the above equation as it is currently unbalanced. (1 mark)

- b. If 665.42 g of phosphoric acid (H_3PO_4) reacted, how many moles of water were produced? (2 marks)

c. Consider if 8.15 *mol* of K_3PO_4 was produced.

i. How many moles of phosphoric acid were used up? (2 marks)

ii. How much water was also produced? (2 marks)

iii. What is the mass of KOH required to get this amount of K_3PO_4 ? (2 marks)

Space for Personal Notes

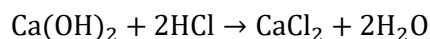


Sub-Section [2.3.3]: Identify the Limiting Reagent When Reactants' Amounts are Known

Question 22 (2 marks)



Consider the reaction:




There are 13.00 g of Ca(OH)_2 and 5.00 g of HCl, determine what the limiting and excess reagents are.

Question 23 (4 marks)



9.55 g of Na_3PO_4 and 7.31 g of CaCl_2 are mixed and allowed to react according to this equation:



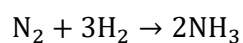
a. Which reactant is the limiting reagent? Which reactant is in excess? (2 marks)

b. What is the mass of $\text{Ca}_3(\text{PO}_4)_2$ that is formed? (2 marks)

Question 24 (6 marks)



Consider the following reaction:



There are 14.00 g of N_2 and 4.00 g of H_2 .

a. What are the limiting and excess reagents? (2 marks)

b. Find the mass of NH_3 formed. (2 marks)

c. In another experiment, if 25.5 g of NH_3 was formed, how much H_2 was used initially in grams? (2 marks)


Question 25 (9 marks)

Consider the combustion reaction of pentane at 200°C.

- a.** Write the fully balanced reaction. (1 mark)

- b.** Consider in an experiment we had 44.00 g of pentane and 160.00 g of oxygen gas.

- i.** What are the limiting and excess reagents? (2 marks)

Pentane is the limiting reagent and oxygen gas is the excess.

- ii.** What is the mass of gases formed? (2 marks)

- iii.** Is this the same as the total mass of gases left over at the end of the reaction? (2 marks)

c. In another experiment, if 88.00 g of CO_2 was formed, how much O_2 was used initially in grams? (2 marks)

Space for Personal Notes

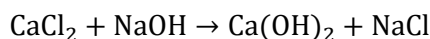


Sub-Section [2.3.4]: Apply Limiting Reagent to Calculate the Mass of Product(s) Formed, & the Amount of Excess Reagent Leftover

Question 26 (3 marks)



Given the following reaction:



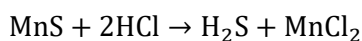
- a. Balance the equation. (1 mark)

- b. A sample of 5.00 moles of CaCl_2 and 5.00 moles of NaOH reacts. What is the amount of CaCl_2 that would be left over? (2 marks)

Question 27 (6 marks)



An experiment is conducted according to the following equation:



If a sample contained 50.00 g of MnS and 26.00 g of HCl , determine the excess and limiting reagent. (2 marks)

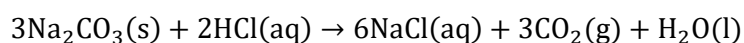
- a. Which is the excess and limiting reagent? (2 marks)

b. What is the amount left of the reactants? (2 marks)

Question 28 (7 marks)



Given the following reaction:



a. Given that there was 9.40 g of sodium carbonate and 8.90 g of hydrogen chloride, find the limiting and excess reagents. (3 marks)

Therefore, the sodium carbonate is limiting, and hydrogen chloride is excess.

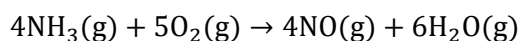
b. Find the mass of NaCl and CO₂ that will be produced. (2 marks)

- c. What is the mass of the excess reagent left over? (2 marks)

Question 29 (9 marks)



Given the following reaction:



- a. Given that there was 5.03 g of NH_3 and 3.45 g of O_2 , find the limiting and excess reagents. (2 marks)

- b. After the reaction is completed, some of the excess reagent remains.

- i. Find the amount of excess reagent that is left over. (2 marks)

- ii. Find the mass of the excess reagent that is left over. (1 mark)

iii. Find the mass of gases produced. (2 marks)

c. What is the amount, in grams, of the current limiting reagent we need to add to turn the reaction into one where the reactants fully react? (2 marks)

Space for Personal Notes



Website: contoureducation.com.au | Phone: 1800 888 300 | Email: hello@contoureducation.com.au

VCE Chemistry ½

Free 1-on-1 Support



Be Sure to Make The Most of These (Free) Services!

- Experienced Contour tutors (45 + raw scores, 99 + ATARs).
- For fully enrolled Contour students with up-to-date fees.
- After school weekdays and all-day weekends.

<u>1-on-1 Video Consults</u>	<u>Text-Based Support</u>
<ul style="list-style-type: none">➤ Book via bit.ly/contour-chemistry-consult-2025 (or QR code below).➤ One active booking at a time (must attend before booking the next).	<ul style="list-style-type: none">➤ Message +61 440 137 304 with questions.➤ Save the contact as "Contour Chemistry".

Booking Link for Consults

bit.ly/contour-chemistry-consult-2025



Number for Text-Based Support

[+61 440 137 304](tel:+61440137304)