



Website: contoureducation.com.au | Phone: 1800 888 300
Email: hello@contoureducation.com.au

VCE Chemistry ½
Intermolecular Bonding [0.7]
Workshop

Error Logbook:



Mistake/Misconception #1		Mistake/Misconception #2	
Question #:	Page #:	Question #:	Page #:
Notes:		Notes:	
Mistake/Misconception #3		Mistake/Misconception #4	
Question #:	Page #:	Question #:	Page #:
Notes:		Notes:	

Section A: Recap

[1.8.1] - Explain how dispersion forces form & identify molecules that can exhibit them



- Dispersion forces: when two or more _____ or **instantaneous** dipoles come together, arising from the **[symmetrical]** / **[asymmetrical]** distribution of electrons.
- This intermolecular bond occurs because electrons are **[fixed]** / **[randomly moving]** in molecules, and so they may temporarily group closely together on one side.
- Dispersion forces are the **[strongest]** / **[weakest]** type of intermolecular bonding that exists.
- Dispersion forces occur in **[polar]** / **[non-polar]** / **[all]** / **[specific]** molecules.
- Atoms/molecules with **more electrons** have a **[greater]** / **[same]** / **[lesser]** chance for **temporary dipoles** to be formed, and as such, have **[stronger]** / **[identical]** / **[weaker]** dispersion forces.

[1.8.2] - Explain how dipole-dipole attractive forces form & identify molecules that can exhibit them



- _____ are an intermolecular bond that occurs between **two dipoles**.
- While dispersion forces can occur in **all** molecules, dipole-dipole attractions only occur in _____ molecules.
- As dipoles in polar molecules are **[temporary]** / **[permanent]**, these forces are **[stronger]** / **[weaker]** than dispersion forces, wherein the dipoles are only temporarily formed.

[1.8.3] - Explain how hydrogen bonds form & identify molecules that can exhibit them



- Hydrogen bonds are a **special type of dipole-dipole bond**. They are the _____ type of intermolecular bond out of the three major intermolecular bonds. This is due to:
- The **large** _____.
- The _____ **atom** which is **[small]** / **[large]** in nature allows molecules to approach close to it as it is left exposed to the large electronegativity difference.
- For a H-bond to form:
 - A hydrogen atom has to be _____ **bonded** to one of **FON** (Fluorine, Oxygen or Nitrogen).

- That same H atom can form a **dipole-dipole** bond with **any F, O or N atom** on a _____.

[1.8.4] - Apply intermolecular bonding to compare molecules' melting & boiling points



- Intramolecular bonding - happens **[within]** / **[between]** molecules.
- Intermolecular bonding - happens **[within]** / **[between]** molecules.
- Substances exist either as a _____ a given temperature.
- Their state depends on the **strength** of its _____ bonds.
- _____ is the phase change from Solid → Liquid: Intermolecular bonds are _____.
- _____ is the phase change from Liquid → Gas: Intermolecular bonds are _____.

<u>Dispersion Forces</u>	<u>Dipole-dipole</u>	<u>Hydrogen Bonds</u>
Weakest Intermolecular Bond.	Stronger Intermolecular Bond.	Strongest Intermolecular Bond.
Occurs in all molecules.	Only occurs in polar molecules.	Only occurs between one of FON and hydrogen which is covalently bonded to FON.
Formed by temporary/instantaneous dipoles which form temporary partial charges.	Formed from permanent dipoles due to polarity of molecules which results in electrostatic attraction.	Formed from the high electronegativity between hydrogen (H) and one of FON which exposes the hydrogen atom to even stronger electrostatic attraction.

Space for Personal Notes

Section B: Warm Up (18 Marks)

INSTRUCTION: 18 Marks. 12 Minutes Writing.



Question 1 (2 marks)

List all four types of intermolecular bonds.

Question 2 (2 marks)

Nitrogen (N_2) exists as a gas at room temperature. What can you conclude about the relative strength of the intermolecular bonding in nitrogen gas compared to pure hydrogen chloride gas (HCl)?

Space for Personal Notes

Question 3 (7 marks)

Matthew is investigating the different types of intermolecular bonds.

- a. Describe how dispersion forces form between molecules. (2 marks)

- b. Describe how dipole-dipole interactions form between molecules. (2 marks)

- c. Describe the conditions required for a hydrogen bond to form. (2 marks)

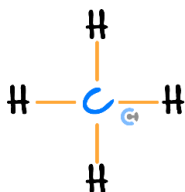
- d. Rank these three types of intermolecular bonds from strongest to weakest. (1 mark)

Space for Personal Notes

Question 4 (4.5 marks)

Which one of the following molecules can form hydrogen bonds with itself?

a. (0.5 marks)



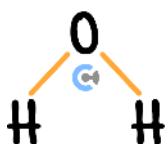
[Yes] / [No]

b. (0.5 marks)



[Yes] / [No]

c. (0.5 marks)



[Yes] / [No]

d. (0.5 marks)



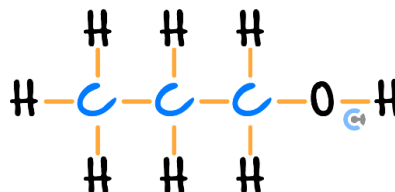
[Yes] / [No]

e. (0.5 marks)



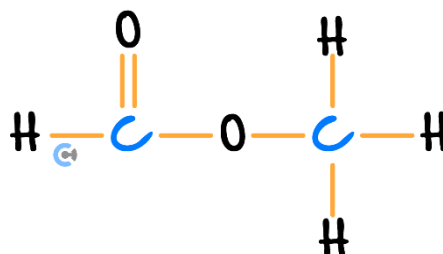
[Yes] / [No]

f. (0.5 marks)



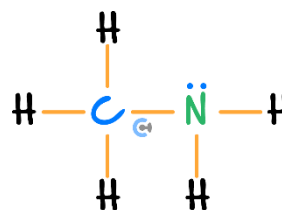
[Yes] / [No]

g. (0.5 marks)



[Yes] / [No]

h. (0.5 marks)



[Yes] / [No]

i. (0.5 marks)



[Yes] / [No]

Question 5 (2.5 marks)

Name the type(s) of intermolecular forces that exist between molecules in each of the following species.

a. CH_4 . (0.5 marks)

b. Cl_2 . (0.5 marks)

c. HCl . (0.5 marks)

d. CH_3F . (0.5 marks)

e. NH_3 . (0.5 marks)

Space for Personal Notes

Section C: Ramping Up (16 Marks)

INSTRUCTION: 16 Marks. 11 Minutes Writing.



Question 6 (1 mark)

Which one of these options correctly describes a hydrogen bond?

- A. The partially positive hydrogen is attracted to an electronegative atom in another molecule, thereby forming a hydrogen bond.
- B. The partially positive hydrogen that can be attached to an electronegative atom forms a hydrogen bond with an electronegative atom that must be attached to another hydrogen.
- C. The partially positive hydrogen forms a bond with another hydrogen that is attached to an electronegative atom.
- D. The partially positive hydrogen that must be attached to an electronegative atom forms a hydrogen bond with an electronegative atom that can be attached to another hydrogen.

Space for Personal Notes

Question 7 (6 marks)

Reina is considering the element of nitrogen and the molecules it can form. The two molecules, nitrogen gas (N_2) and ammonia (NH_3) are used.

a. Draw the Lewis Structure of:

i. Nitrogen gas (N_2). (1.5 marks)

ii. Ammonia (NH_3). (1.5 marks)

b. Which of N_2 and NH_3 will have stronger intermolecular bonding? Justify your answer. (2 marks)

c. As such, which of the molecules will have a higher boiling point? (1 mark)

Space for Personal Notes

Question 8 (9 marks)

Consider a molecule of octane which has a molecular formula of C_8H_{18} .

a. This octane is compared with ethane, C_2H_6 .

i. Draw the Lewis structure of ethane (C_2H_6). (2 marks)

ii. Compare the boiling point of octane with that of ethane, C_2H_6 . (2 marks)

b. The octane is also compared with fluoromethane (CH_3F). Draw the Lewis structure of fluoromethane. (2 marks)

c. Do you expect octane to have a higher or lower boiling point than a molecule of CH_3F ? Justify your answer. (3 marks)

Section D: Getting Trickier I (11 Marks)

INSTRUCTION: 11 Marks. 9 Minutes Writing.



Question 9 (11 marks)

Hydrofluoric acid also known as HF is an acidic substance. We usually dilute it in several ways to make it safer for human handling.

a. The structure of HF is to be investigated.

i. Draw the Lewis Structure of HF. (1 mark)

ii. Draw the polarity arrow on the HF above. (1 mark)

b. Explain whether HF is polar or non-polar. (2 marks)

c. What sort of intermolecular bonds can HF make? (1 mark)

d. Would we expect HF to have a higher boiling point than HBr? Justify your answer. (2 marks)

- e. How would the intermolecular bonding of HF differ from another molecule such as CH_4 ? (2 marks)

- f. When we drop HF into a solution of H_2O , we see that the two substances mix with each other pretty well. However, when we drop CH_4 into H_2O , we see that they do not mix at all. What does H_2O have in common with HF but not CH_4 ? (1 mark)

- g. As such, what sort of conclusion can we draw in terms of molecules mixing with each other? (1 mark)

Space for Personal Notes

Section E: Getting Trickier II (10 Marks)

INSTRUCTION: 10 Marks. 9 Minutes Writing.



Question 10 (1 mark)

Which of the following substances might one expect to exhibit the weakest intermolecular forces?

- A. HCl
- B. He
- C. NH_3
- D. H_2O

Question 11 (1 mark)

Rank HCl, He, NH_3 and H_2O in increasing the strength of intermolecular bonds.

Question 12 (1 mark)

What do you think is the difference between H_2O is a liquid versus when it's a gas, such as in steam, with regards to its intermolecular bonds?

- A. The intermolecular bonding between H_2O molecules in liquid form will be weaker than when it's a gas, as the gas expands to a larger volume.
- B. There is no difference with regard to its intermolecular bonds since the change is a physical change.
- C. The intermolecular bonding between H_2O molecules will overall be much weaker when it's a gas compared to when it's a liquid.
- D. The dispersion forces will remain in H_2O when it's a gas, but all the hydrogen bonds and dipole-dipole attractions will disappear because of the change of state.

Question 13 (7 marks)

Andrew is analysing several pairs of molecules and is a bit confused when he sees that they have different boiling points.

- a.** He notices that two noble gases, helium and argon, have boiling points of -269°C and -186°C respectively. Explain the large difference in their boiling points. (3 marks)

- b.** Both Kr (boiling point -152°C) and HBr (boiling point -67°C) have the same number of electrons. Explain what factors could affect intermolecular forces to cause the difference in boiling points between Kr and HBr. (2 marks)

- c. He also notices that HCl has more electrons than HF so we would expect it to have a higher boiling point. However, this is not the case, as the boiling points of HCl and HF are -83.7°C and 19.4°C respectively. Explain what factors could account for this reversal in trend. (2 marks)

Let's take a BREAK!



Space for Personal Notes

Section F: VCAA-Level Questions I (15 Marks)

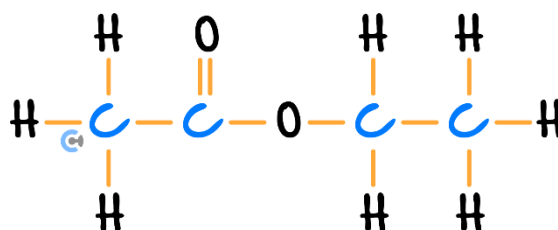
INSTRUCTION: 15 Marks. 30 Seconds Reading. 14 Minutes Writing.



Question 14 (8 marks)

- a. Compare the intermolecular bonding strength of CH_3Cl and CH_3OH , stating their similarities and differences. (3 marks)

- b. Below is a molecule of ethyl ethanoate. What sort of intermolecular bonds can it make with itself? (1 mark)



- c. Explain why it can or cannot make hydrogen bonds with itself. (2 marks)

- d.** Is there a situation in which it can actually form hydrogen bonds? Justify your answer with an example. (2 marks)

Question 15 (7 marks)

Dichloromethane (CH_2Cl_2) and carbon tetrachloride (CCl_4) both contain carbon-chlorine bonds.

- a.** Draw the structure of:

i. Carbon tetrachloride (CCl_4), and draw the polarity arrows, if any. (2 marks)

ii. Dichloromethane (CH_2Cl_2), and draw the polarity arrows, if any. (2 marks)

b. Explain which substance is likely to have a greater melting point. (3 marks)

Space for Personal Notes

Section G: Multiple Choice Questions (8 Marks)

INSTRUCTION: 8 Marks. 8 Minutes Writing.



Question 16 (1 mark)

What is false about dispersion forces?

- A. Dispersion forces occur when dipoles form in molecules from the electrons fixed on one side more than the other side.
- B. Dispersion forces occur when instantaneous dipoles form in molecules from the electrons gathering more to one side.
- C. Dispersion forces exist in all molecules.
- D. Dispersion forces are the weakest form of intermolecular bonding.

Question 17 (1 mark)

Dipole-dipole attractions are one type of intermolecular bonding that can exist between molecules. Which one of the following statements is true?

- A. Dipole-dipole attractions occur between temporary dipoles caused by the electronegativity difference between the molecules involved.
- B. The strength of dipole-dipole attractions depends on the size or length of the molecules involved.
- C. Dipole-dipole attractions are formed using at least one dipole.
- D. The strength of dipole-dipole attractions depends on the polarity of the molecules involved.

Space for Personal Notes

Question 18 (1 mark)

Which of the following molecules does not form hydrogen bonds with itself?

- A. NH_3
- B. HF
- C. HCl
- D. HCOOH

Question 19 (1 mark)

Which one of the following explanations is the most correct as to why CH_4 has weaker intermolecular bonding than CH_3OH ?

- A. CH_3OH has a larger size than CH_4 there it will have stronger dispersion forces
- B. CH_3OH can form dipole-dipole attractions, whereas CH_4 cannot, therefore CH_3OH will have stronger intermolecular bonding.
- C. The CH_3OH molecule can form dipole-dipole attractions and hydrogen bonds on top of dispersion forces, therefore it will have stronger intermolecular bonding than CH_4 which can only form dispersion forces.
- D. The CH_3OH molecule can form hydrogen bonds with itself, whereas CH_4 can only form dispersion forces, therefore CH_3OH will have stronger intermolecular bonding.

Question 20 (1 mark)

When we are comparing the intermolecular bonding strengths of two non-polar molecules, what factors do we need to consider?

- A. Dispersion forces, ion-dipole attractions.
- B. How many F, O, N it has, the difference in electronegativity, the size/length of the molecule.
- C. The size/length of the molecule.
- D. The size/length of the molecule, how many F, O, N it has.

Space for Personal Notes

Question 21 (1 mark)

Which of the following statements is completely false about any molecule that contains oxygen, given that it is polar?

- A. The molecule will form dispersion forces with itself.
- B. The molecule will form dispersion forces and dipole-dipole attractions with itself.
- C. The molecule will form dispersion forces, dipole-dipole attractions and hydrogen bonding with itself.
- D. The molecule has a net dipole.

Question 22 (1 mark)

Is it possible for a non-polar molecule with only dispersion forces to have stronger intermolecular bonding than another polar molecule with dipole-dipole attraction?

- A. Yes, because if the non-polar molecule has an electronegative atom it could rival the polar molecule in its electronegativity.
- B. Yes, because if the dispersion forces are much, much stronger than the dipole-dipole attractions, such as if the non-polar molecule is a lot larger than the polar molecule.
- C. No, because the magnitude of the difference between dispersion forces and dipole-dipole attractions is too great, as such the dispersion forces would never catch up.
- D. No, because the polar molecule has dispersion forces on top of its dipole-dipole attractions, therefore it would overtake the non-polar molecule every time.

Question 23 (1 mark)

What's the most plausible reason that hydrogen bonds are only formed when fluorine, oxygen or nitrogen is involved?

- A. The other elements don't have enough valence electron shells that are required to create a strong hydrogen bond.
- B. The other elements don't have a large enough electronegativity that is required to create the strong hydrogen bond.
- C. For a hydrogen bond to be created, only the non-metals in that period can bond with hydrogen to create them.
- D. The other elements don't have the same effective nuclear charge that is required to create the strong hydrogen bond.

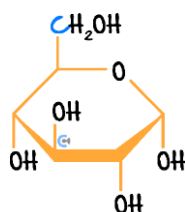
Section H: VCAA-Level Questions II (10 Marks)

INSTRUCTION: 10 Marks. 30 Seconds Reading. 9 Minutes Writing.



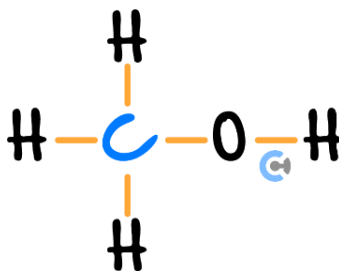
Question 24 (6 marks)

Consider the following molecule of glucose, the simplest carbohydrate, or sugar, that you can eat. Below is a skeletal structure of glucose, where each intersection of the line represents a carbon.



- a. Would you expect glucose to be polar or non-polar? Justify your answer with reference to the structure of glucose. (2 marks)

b. Methanol is also compared, which has the following Lewis Structure.

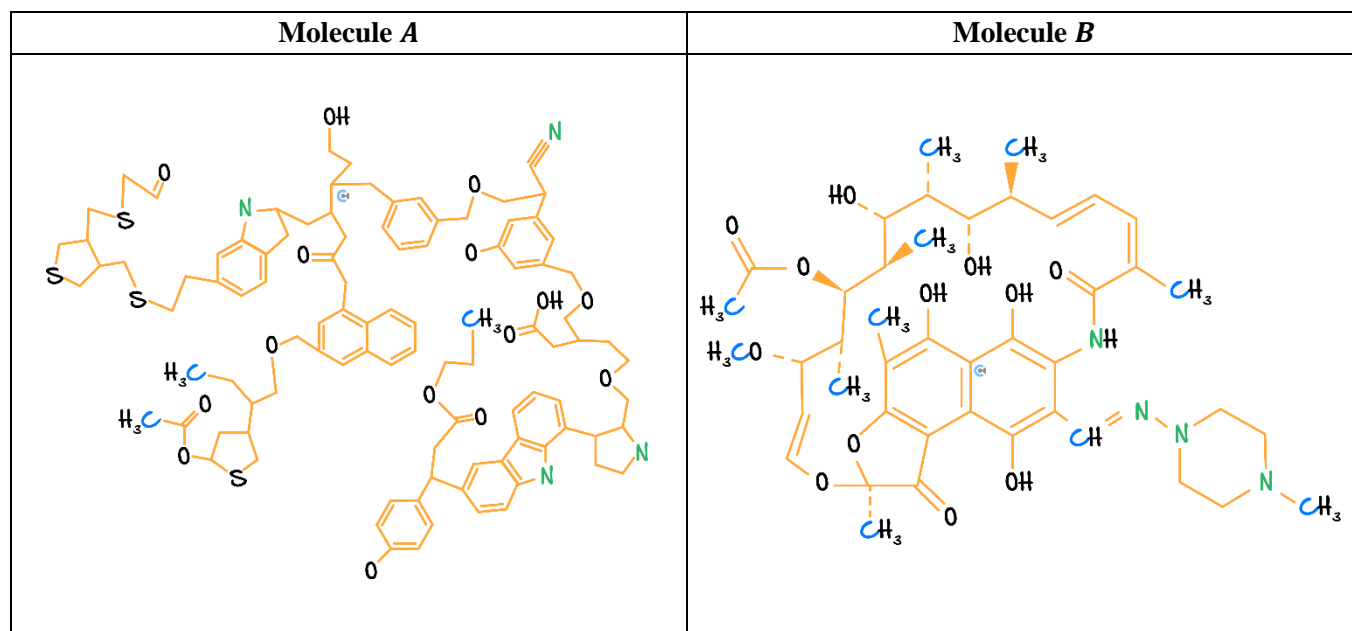


- i. Draw the polarity arrow on methanol. (1 mark)
- ii. Compare the intermolecular bonding strength of glucose compared to methanol CH_3OH , noting down both similarities and differences. (3 marks)

Space for Personal Notes

Question 25 (4 marks)

The two molecules are observed below.



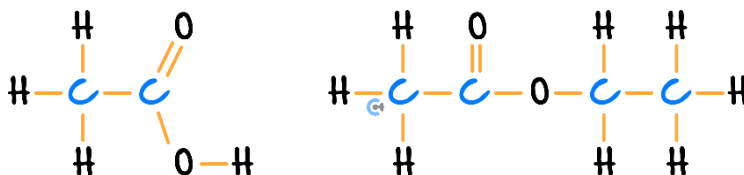
Which one of these molecules is likely to have a greater melting point, given that they have roughly the same number of electrons? Justify your answer.

Space for Personal Notes

Section I: Extension Questions (9 Marks)

Question 26 (7 marks)

Consider the molecule of ethanoic acid (left) and ethyl ethanoate (right).



- a. The types of intermolecular bonds within each of the two molecules are investigated.
- Which molecule would have stronger **dispersion forces** with itself? Justify your answer. (2 marks)
- _____
- _____
- _____
- _____
- Which molecule would have stronger **dipole-dipole attractions** and **hydrogen bonds** with itself? Justify your answer. (2 marks)
- _____
- _____
- _____
- _____
- b. Is the difference in the strength of the dispersion forces between ethanoic acid and ethyl ethanoate more significant than the difference in the strength of the polar intermolecular bonding between the two molecules? (2 marks)
- _____
- _____
- _____
- _____

c. Hence, which molecule would have an overall stronger intermolecular bond strength? (1 mark)

Question 27 (2 marks)

Methanol and ethanol have the formulas CH_3OH and $\text{CH}_3\text{CH}_2\text{OH}$. Predict which has the higher boiling point and give clear reasons why.

Space for Personal Notes

VCE Chemistry ½

Free 1-on-1 Support



Be Sure to Make The Most of These (Free) Services!

- Experienced Contour tutors (45+ raw scores, 99+ ATARs).
- For fully enrolled Contour students with up-to-date fees.
- After school weekdays and all-day weekends.

<u>1-on-1 Video Consults</u>	<u>Text-Based Support</u>
<ul style="list-style-type: none">➤ Book via bit.ly/contour-chemistry-consult-2025 (or QR code below).➤ One active booking at a time (must attend before booking the next).	<ul style="list-style-type: none">➤ Message +61 440 137 304 with questions.➤ Save the contact as "Contour Chemistry".

Booking Link for Consults

bit.ly/contour-chemistry-consult-2025



Number for Text-Based Support

[+61 440 137 304](tel:+61440137304)