



Website: contoureducation.com.au | Phone: 1800 888 300
Email: hello@contoureducation.com.au

VCE Biology $\frac{3}{4}$
Introduction to Immunity [3.1]
Homework

Admin Info & Homework Outline:

Student Name	
Questions You Need Help For	
Compulsory Questions	Pg 2-Pg 19



Section A: Compulsory Questions (37 Marks)

Sub-Section [3.1.1]: Define the Terms Antigen, Pathogen, Allergen, Cellular & Non-Cellular, & Describe the Difference between Self & Non-Self

Question 1



Define the following.

a. Antigen:

b. Pathogen:

c. Allergen:

d. Cellular:

e. Non-cellular:

f. Self vs Non-self:

i. Self:

ii. Non-self:

Question 2 (1 mark)



A patient is diagnosed with a viral infection caused by the influenza virus. The immune system recognises the influenza virus as an external threat. Which of the following best describes the influenza virus in this scenario?

- A. Pathogen
- B. Allergen
- C. Antigen
- D. Self

Question 3 (1 mark)



During an allergic reaction to pollen, the immune system overreacts to a harmless substance. Which of the following terms best describes pollen in this context?

- A. Antigen
- B. Pathogen
- C. Self
- D. Allergen

Question 4 (1 mark)

A body cell presents a foreign protein fragment on its surface that triggers an immune response. What does the immune system recognise in this case?

- A. Antibody
- B. Self
- C. Antigen
- D. Receptor

Question 5 (1 mark)

Which of the following is true about the immune system's ability to distinguish between self and non-self?

- A. The immune system always recognises self as foreign.
- B. Non-self molecules are typically recognised as threats.
- C. Self molecules can trigger allergic reactions.
- D. The immune system does not respond to non-self pathogens.

Question 6 (1 mark)

Which of the following is a characteristic feature distinguishing non-cellular pathogens from cellular pathogens?

- A. Non-cellular pathogens lack nucleic acids.
- B. Non-cellular pathogens cannot replicate independently.
- C. Non-cellular pathogens are always larger than cellular pathogens.
- D. Non-cellular pathogens do not elicit immune responses.

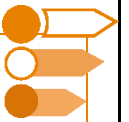
Space for Personal Notes


Question 7 (2 marks)

Prions are misfolded proteins that induce normal proteins in the brain to adopt abnormal conformations, leading to neuronal damage and neurodegenerative diseases. Unlike other pathogens, prions lack nucleic acids and are composed solely of protein.

Based on their structure and replication method, how should prions be classified: as cellular or non-cellular pathogens? Justify.

Space for Personal Notes



Sub-Section [3.1.2]: Differentiate between the Two Types of Major Histocompatibility Complex Proteins displayed on Cells, and Explain their Significance

Question 8



Define the following.

a. MHC I Markers:

b. MHC II Markers:

Question 9 (1 mark)



Which of the following statements accurately describes MHC Class I molecules?

- A. They are expressed exclusively on antigen-presenting cells (APCs).
- B. They present antigens to T-helper cells.
- C. They are found on all nucleated cells and play a role in distinguishing self from non-self.
- D. They are absent from platelets.

Space for Personal Notes

Question 10 (1 mark)


MHC Class II molecules are primarily found on which of the following cell types?

- A. Erythrocytes.
- B. Neurons.
- C. Antigen-presenting cells.
- D. All nucleated cells.

Question 11 (1 mark)


Which of the following statements is true regarding the expression of MHC Class I molecules?

- A. MHC Class I molecules are present on all nucleated cells, including red blood cells.
- B. Mature red blood cells lack MHC Class I molecules due to the absence of a nucleus.
- C. Only antigen-presenting cells express MHC Class I molecules.
- D. MHC Class I molecules are found exclusively on platelets.

Space for Personal Notes

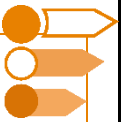

Question 12 (6 marks)

- a. Explain the role of MHC class I molecules in the immune system and identify which cells are primarily involved in presenting antigens via MHC class I. (2 marks)

- b. In the context of autoimmune disorders, how might the malfunction or misexpression of MHC class molecules contribute to the immune system, attacking the body's own cells? For example, in type 1 diabetes, immune cells attack beta cells in the pancreas. (2 marks)

- c. A student argues that MHC class I molecules are responsible for the incompatibility of blood transfusions between people of different blood types. Is this student correct? Explain why or why not. (2 marks)

Space for Personal Notes



Sub-Section [3.1.3]: Identify & Describe the Pathogens Assessed in
VCE - Bacteria, Fungi, Protists, Parasites, Viruses, & Prions - Including How they
cause Disease

Question 13


Define the following.

a. Bacteria:

b. Fungi:

c. Protists:

d. Parasites:

e. Viruses:

f. Prions:

Question 14 (1 mark)



Which of the following characteristics is common to both viruses and prions?

- A. They both have a complex cellular structure.
- B. They can replicate independently of a host cell.
- C. They are both non-living.
- D. They can be treated with antibiotics.

Question 15 (1 mark)



Which of the following pathogens is characterised by being eukaryotic and often parasitic, but not typically classified as fungi or bacteria?

- A. Bacteria
- B. Protists
- C. Viruses
- D. Prions

Space for Personal Notes

Question 16 (1 mark)


A 45-year-old man is experiencing memory loss, difficulty with balance, and a lack of coordination. He has been progressively getting worse over the past few months. His medical history includes a history of consuming beef from cattle that were raised in areas with poor agricultural practices. Brain scans show spongy tissue in certain areas of his brain.

Which pathogen is most likely responsible for this patient's condition?

- A. Virus
- B. Prion
- C. Fungus
- D. Bacteria

Question 17 (1 mark)


What is the role of the viral genome in the viral structure?

- A. To produce energy for the virus.
- B. To store the instructions for making new virus particles.
- C. To protect the host cell from infection.
- D. To help the virus evade the immune system.

Question 18 (1 mark)


Which of the following components is found in all viruses?

- A. Nucleus
- B. Ribosomes
- C. Protein coat (capsid)
- D. Mitochondria

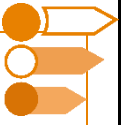
Space for Personal Notes

**Question 19** (1 mark)

Which of the following best describes the capsid of a virus?

- A. A protein layer that surrounds and protects the viral genome.
- B. A lipid layer that surrounds the virus and helps it infect host cells.
- C. A network of enzymes required for viral replication.
- D. A structure responsible for energy production within the virus.

Space for Personal Notes



Sub-Section [3.1.4]: Identify & Describe the Physical, Chemical, Microbiological Barriers to Infection present in both Animals & Plants

Question 20



Define the following.

Animals

a. Physical Barriers:

i. Skin:

ii. Mucous Membranes:

iii. Cilia:

b. Chemical Barriers:**i. Acidic pH:**

ii. Lysozyme:

iii. Antimicrobial Peptides:

c. Microbiological Barriers:

Normal Flora (Microbiota):

Plants
d. Physical Barriers:
i. Cell Wall:

ii. Cuticle:

iii. Trichomes:

Question 21 (1 mark)


A researcher investigates the role of physical barriers in protecting an animal from infection. The animal is exposed to a pathogen, but no infection occurs due to an intact layer of tissue preventing pathogen entry. Which of the following is most likely the barrier responsible for preventing the infection?

- A.** Cilia in the respiratory system.
- B.** Normal microbiota in the intestines.
- C.** The skin's keratinised epithelial cells.
- D.** The stomach's acidic pH.

Space for Personal Notes

Question 22 (1 mark)


In a controlled experiment, a plant is exposed to a fungal pathogen. The plant produces a compound that inhibits the growth of the pathogen. Which of the following best describes the type of barrier being activated in the plant?

- A. Physical barrier
- B. Chemical barrier
- C. Microbiological barrier
- D. None of the above.

Question 23 (1 mark)


A plant exhibits wilting and yellowing of leaves after being exposed to a bacterial infection. The plant increases the production of a protein that blocks bacterial enzymes and inhibits the pathogen. Which of the following explains the plant's response?

- A. The plant is activating a microbiological barrier by increasing its normal flora.
- B. The plant is increasing its chemical barriers through protein production.
- C. The plant is using a physical barrier to block pathogen entry.
- D. The plant is activating an immune response by producing antimicrobial proteins.

Question 24 (1 mark)


A scientist is studying the effect of normal microbiota in preventing infection in an animal model. The model is exposed to a harmful pathogen, but infection does not occur due to the presence of beneficial microorganisms in the gut. Which barrier is primarily responsible for this defence?

- A. Physical barrier
- B. Microbiological barrier
- C. Chemical barrier
- D. Immune response

Space for Personal Notes

Question 25 (1 mark)


After being exposed to a harmful pathogen, a plant rapidly develops a waxy coating on its leaves, which prevents further pathogen spread. Which of the following best describes this plant's response?

- A. It has activated a chemical barrier to stop the infection.
- B. It has enhanced its physical barrier to prevent further pathogen invasion.
- C. The plant is increasing its microbiological defence by promoting beneficial microbes.
- D. It is signalling an immune response in an attempt to fight off the pathogen.

Question 26 (1 mark)


Cilia and mucus work together in the respiratory system to prevent infection. Which of the following best describes how cilia and mucus function together to protect the body?

- A. Cilia trap pathogens in mucus and expel them through coughing or sneezing.
- B. Mucus destroys pathogens by producing enzymes that break down their cell walls.
- C. Cilia increase mucus production to wash pathogens away from the lungs.
- D. Mucus prevents pathogens from attaching to epithelial cells, while cilia kill the pathogens.

Question 27 (1 mark)


A researcher is studying the role of tears and saliva in preventing infection. Which of the following is the most likely function of these bodily fluids in protecting against pathogens?

- A. Tears and saliva contain lysozyme, which breaks down bacterial cell walls.
- B. They act as physical barriers to prevent pathogens from entering the body.
- C. Tears and saliva create a sticky surface that traps pathogens, preventing them from spreading.
- D. They contain antibodies that specifically target and destroy viral pathogens.

Space for Personal Notes

Question 28 (1 mark)


A scientist studies a plant that produces trichomes with a sticky secretion on its leaves. Which of the following is the most likely defence mechanism these trichomes provide against pathogens?

- A. They kill pathogens by directly injecting toxins.
- B. They trap and immobilise pathogens, preventing them from reaching plant tissues.
- C. They produce antimicrobial proteins that target and destroy bacteria.
- D. They secrete a chemical that makes the plant surface slippery, preventing pathogen attachment.

Question 29 (2 marks)


A patient presents with frequent skin infections. Identify and explain the role of two physical barriers in animals that could be compromised in this case.

Space for Personal Notes


Question 30 (5 marks)

- a. A scientist introduces a pathogen into the gastrointestinal tract of an animal. The pathogen fails to establish an infection despite the presence of the pathogen in the gut. Which chemical barrier is likely responsible for this outcome, and how does it act to prevent infection? (3 marks)

- b. In a controlled experiment, a plant's natural microbiota is removed. Explain how this could affect the plant's ability to resist pathogen invasion and describe one strategy the plant might use to compensate for the loss of microbiological protection. (2 marks)

Space for Personal Notes



Website: contoureducation.com.au | Phone: 1800 888 300 | Email: hello@contoureducation.com.au

VCE Biology $\frac{3}{4}$

Free 1-on-1 Support



Be Sure to Make the Most of These (Free) Services!

- Experienced Contour tutors (45 + raw scores, 99 + ATARs).
- For fully enrolled Contour students with up-to-date fees.
- After school weekdays and all-day weekends.

<u>1-on-1 Video Consults</u>	<u>Text-Based Support</u>
<ul style="list-style-type: none">➤ Book via bit.ly/contour-biology-consult-2025 (or QR code below).➤ One active booking at a time (must attend before booking the next).	<ul style="list-style-type: none">➤ Message +61 440 137 387 with questions.➤ Save the contact as "Contour Biology".

Booking Link for Consults

bit.ly/contour-biology-consult-2025



Number for Text-Based Support

[+61 440 137 387](tel:+61440137387)